

# **CIVIL AIR PATROL**

## **U.S. Air Force Auxiliary**

### **Mission Aircrew**

### **Task Guides**



### **Mission Scanner**

**Revision April 2010**

<b>Task #</b>	<b>Title</b>
<b>MS O-0204</b>	Locate a Point using the Standardized Latitude and Longitude Grid System
<b>MS O-0205</b>	Locate a Point using the CAP Grid System
<b>MS O-2015</b>	Demonstrate Ground Operations and Safety
<b>MS O-2016</b>	Demonstrate Safety while Taxiing
<b>MS O-2017</b>	Demonstrate Post-crash Actions
<b>MS O-2018</b>	Operate the Aircraft Communications Equipment
<b>MS O-2019</b>	Demonstrate Proper Number and Character Pronunciation
<b>MS O-2020</b>	Use Prowords and Code Words
<b>MS O-2021</b>	Interpret Emergency Signals and Demonstrate Air-to-Ground Coordination
<b>MS O-2022</b>	Demonstrate Scanning Patterns and Locate Targets
<b>MS O-2023</b>	Demonstrate Techniques to Reduce Fatigue
<b>MS O-2024</b>	Demonstrate Use of Sectional Charts
<b>MS O-2025</b>	Track and Record Position on Sectionals and Maps
<b>MS P-2013</b>	Discuss Mission Scanner Duties and Responsibilities
<b>MS P-2014</b>	Discuss CAP Liability coverage and Mishap Reporting
<b>MS P-2015</b>	Enter Data into CAP Forms
<b>MS P-2016</b>	Identify and Discuss Major Aircraft Controls
<b>MS P-2017</b>	Identify and Discuss Major Aircraft Instruments
<b>MS P-2018</b>	Discuss Weight and Balance
<b>MS P-2019</b>	Identify Items Checked During an Aircraft Pre-flight
<b>MS P-2020</b>	Discuss the Dangers of Wake Turbulence
<b>MS P-2021</b>	Discuss how Atmospheric and Lighting Conditions Effect Scanning Effectiveness
<b>MS P-2022</b>	Identify Visual Clues and Wreckage Patterns
<b>MS P-2023</b>	Discuss Reduced Visibility and Turbulence Effects
<b>MS P-2024</b>	Discuss Strategies to Combat High Altitude Effects
<b>MS P-2025</b>	Discuss Common Search Terms
<b>MS P-2026</b>	Identify What to Look For and Record during Damage Assessments
<b>MS P-2027</b>	Describe CAP Search Patterns
<b>MS P-2028</b>	Discuss Crew Resource Management
<b>P-0101</b>	Keep a Log

**MS O-0204**  
**LOCATE A POINT ON A MAP USING LATITUDE AND LONGITUDE**

**CONDITIONS**

Given an aeronautical sectional chart. locate your position (latitude and longitude) on the chart in order to report your location to mission base, an aircraft or a ground element. Or, you are coordinating with another search element who has reported their location using latitude and longitude and you want to plot this point on your chart.

**OBJECTIVES**

Identify a point on a sectional chart, given its longitude and latitude. Report your position (latitude and longitude), given a point on a sectional chart.

**TRAINING AND EVALUATION**

**Training Outline**

1. As Latitude and longitude are the objective position measurements used on aeronautical charts. Many road maps and topographical maps also are gridded using this system.
  - a. Lines of longitude run north-south on the map. Lines of latitude run east-west.
  - b. Both latitude and longitude are measured in degrees, minutes and seconds. One minute is 1/60th of a degree, and one second is 1/60th of a minute. In the continental US, latitude numbers are read from south to north (bottom to top), and longitude numbers are read from east to west (right to left)
  - c. In North America each line of latitude is labeled as North and each line of longitude is labeled as West.
  - d. To read coordinates the symbol “ ° “ means degrees, an apostrophe ( “ ‘ “) means minutes, and a double apostrophe ( “ “ “) means seconds. Always read the latitude before the longitude.
  - e. Example: 32° 33’ 44” N, 45° 12’ 52” E means “32 degrees, 33 minutes, and 44 seconds North Latitude, 45 degrees 12 minutes and 52 seconds East Longitude”
  - f. On larger scale maps, or when pinpoint accuracy is not required, seconds are not used. For example, 45° 12’ N, 22° 36’ W is read as “45 degrees, 12 minutes North Latitude, 22 degrees 36 minutes West Longitude.”
2. To find the lat/long designation of a known point on the chart:
  - a. Find the latitude by drawing a line from the point to the nearest readable latitude line and note the degrees and minutes.
  - b. Find the longitude by drawing a line from the point to the nearest readable longitude line and note the degrees and minutes.

NOTE: If the lines fall between two "minute" marks you may estimate in "seconds" or insert a decimal such as ".5". So, if the point is halfway between two "minutes", it is at the 30 "second" or ".5" point. For example, N 35° 10.5’, W 101° 49.5’.

- d. Always report latitude and longitude in the following format:
  - 1) Latitude as: North degrees, minutes, seconds or decimal
  - 2) Longitude as: West degrees, minutes, seconds or decimal
3. To plot a point given the lat/long coordinate:
  - a. Find the correct latitude line and mark the sectional at the correct number of minutes (or between minutes).
  - b. Find the correct longitude line and mark the sectional at the correct number of minutes (or between minutes).
  - c. Draw intersecting lines from the latitude and longitude marks and mark the point of intersection.

### Additional Information

Some more information on this topic is available in Chapter 5 of the *Mission Scanner Reference Text* and in the *Ground Team Member and Leader Reference Text*.

### Evaluation Preparation

**Setup:** Mark a point on a sectional chart, and give the chart to the trainee. Also, pick a different point on the sectional and note its latitude and longitude. Have a plotter available.

**Brief Student:** First, give the Scanner trainee the sectional with the point marked for identification. After the trainee determines the point's coordinates, orally give the trainee the latitude and longitude of the other point you noted and ask the trainee to plot this point on the sectional.

### Evaluation

<u>Performance measures</u>	<u>Results</u>
The individual determines the location of a known point:	
1. Determines the correct latitude (degrees and minutes) within tolerance. *	P    F
2. Determines the correct longitude (degrees and minutes) within tolerance. *	P    F
The individual plots a point:	
3. Plots the point on the chart within tolerance. *	P    F
* The minimum accuracy for this task is to be within two minutes (longitude and latitude) of the correct answer.	

Student must receive a pass on all performance measures to qualify in this task. If the individual fails any measure, show what was done wrong and how to do it correctly.

**MS O-0205**  
**LOCATE A POINT ON A MAP USING THE CAP GRID SYSTEM**

**CONDITIONS**

You are a Mission Scanner trainee and must locate a point on a gridded sectional chart.

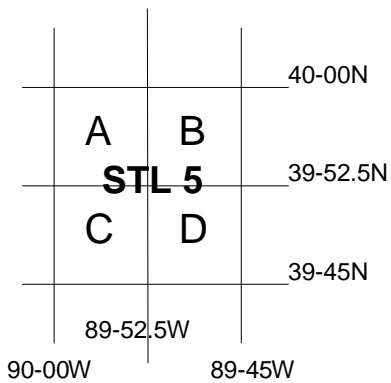
**OBJECTIVES**

Demonstrate how to locate a point on a sectional chart using the CAP Grid System.

**TRAINING AND EVALUATION**

**Training Outline**

1. As a Mission Scanner trainee, knowledge of the CAP Grid System is essential.
2. This system uses a special grid system built upon the matrix of parallels of latitude and meridians of longitude and the sectional aeronautical chart. Information pertaining to this grid system can be found in Attachment E of the *U.S. National SAR Supplement to the International Aeronautical and Maritime SAR Manual*. This table shows the latitude and longitude boundaries of each sectional chart.
3. If necessary each a 15-minute grid can be divided into 4 quadrants using 7 1/2 degree increments of latitude and longitude, creating 4 equal size grids that are approximately 7 1/2 miles square. The quadrants are then identified alphabetically - A through D - starting with the northwest quadrant as A, northeast as B, southwest as C and southeast as D. A search area assignment (St. Louis Sectional chart) in the southeast quadrant may be given as "Search STL 5D."



**Additional Information**

Some more information on this topic is available in Chapter 5 of the *Mission Scanner Reference Text*.

**Evaluation Preparation**

**Setup:** Provide the student with a gridded sectional chart and plotter.

**Brief Student:** You are a Scanner trainee asked to locate a point, referenced to the CAP Grid System.

## Evaluation

### Performance measures

### Results

1. Given a point (latitude and longitude), determine what CAP quarter-grid it's in.

P F

Student must receive a pass on all performance measures to qualify in this task. If the individual fails any measure, show what was done wrong and how to do it correctly.

**MS O-2015**  
**DEMONSTRATE GROUND OPERATIONS AND SAFETY**

**CONDITIONS**

You are a Mission Scanner trainee and must demonstrate safety around an aircraft on the ground.

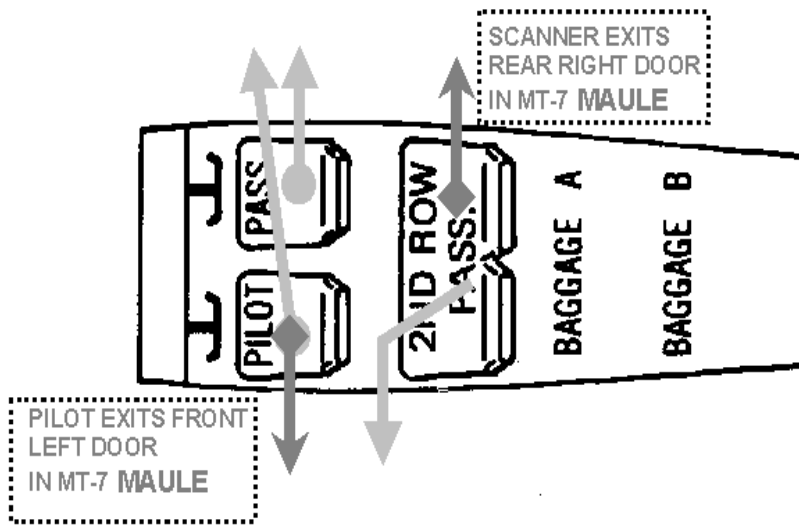
**OBJECTIVES**

Demonstrate ramp safety, moving and loading aircraft, entry/egress, and basic fuel management.

**TRAINING AND EVALUATION**

**Training Outline**

1. As a Mission Scanner trainee, knowledge of aircraft ground operations and safety is essential.
2. Ramp safety:
  - a. Don't wear headgear, don't run, and always look out for moving aircraft and spinning propellers.
  - b. No smoking within 50 feet of aircraft or fuel trucks/tanks.
  - c. Keep clear of aircraft, especially the propeller or turbines. A propeller spins at over 2000 rpm, so you may not be able to see it. If you see an aircraft sitting on the ramp with a rotating beacon or strobe light on, the pilot may be about to start the engine. Also, the trailing edges of the wings, flaps and ailerons may be sharp and are often at head level.
  - d. In case of a fire on the ground, get clear of the aircraft. Know where the nearest large fire extinguisher is. But, if fuel is spilling and it isn't necessary to help people clear of the fire, get away and call the fire department.
3. Moving aircraft. Never push or pull an aircraft without a pilot being present, and don't rotate, hold or move a propeller. Never push or stand on any part of the aircraft labeled "No Push."
4. Loading aircraft. Ensure all loose items are stowed and secured (e.g., under the cargo net). Loose objects can become projectiles during turbulence, hurting occupants or damaging equipment. Also, if you are about to load something that wasn't discussed prior to the flight (e.g., during the weight and balance calculations), tell the pilot.
5. Entry and egress:
  - a. Be careful where you step. Watch for "No Step" or "No Handhold" placards.
  - b. As a rule, never enter or exit an aircraft while the engine is running. If you must, always ensure the pilot knows your intentions and approach from the rear.
  - c. Always wear your seatbelt and shoulder harness (unless such wear interferes with crew member duties). You may remove the shoulder harness for some duties, such as taking photos, but it makes good sense to leave it fastened in case unexpected turbulence is encountered.
  - d. Part of every pre-flight should include a briefing on emergency egress in order to avoid confusion. Crewmembers will remove their headsets. In most CAP aircraft, the pilot will leave his seat full forward so those in the back seat can exit out the left door. The pilot will then follow the observer out the right door.



6. Fuel management. The pilot is responsible for planning enough fuel is available to complete the flight safely with sufficient reserves left for diversions or emergencies. She should brief you on the fuel situation before the flight, including her assumptions on how much fuel will be needed (usually expressed in hours and minutes) and where you will refuel if necessary. Fuel status should be checked once an hour. Never feel hesitant to ask about your fuel status.

### Additional Information

More detailed information on this topic is available in Chapter 2 of the *Mission Scanner Reference Text*.

### Evaluation Preparation

**Setup:** The evaluation should be conducted with an aircraft on the ramp, with a PIC present.

**Brief Student:** You are a Scanner trainee asked about safety around aircraft on the ground.

### Evaluation

<u>Performance measures</u>	<u>Results</u>
1. Discuss ramp safety.	P F
2. Demonstrate moving and loading an aircraft.	P F
3. Demonstrate donning and removing a seat belt and shoulder harness.	P F
4. Demonstrate entry and emergency egress from <b>all</b> seats in the aircraft.	P F
5. Discuss the scanner's role in basic fuel management.	P F

Student must receive a pass on all performance measures to qualify in this task. If the individual fails any measure, show what was done wrong and how to do it correctly.

**MS O-0216**  
**DEMONSTRATE SAFETY WHILE TAXIING**

**CONDITIONS**

You are a Mission Scanner trainee and must demonstrate safety techniques while taxiing in an aircraft.

**OBJECTIVES**

Demonstrate safety while taxiing, including airport signs and markings and flightline hand signals.

**TRAINING AND EVALUATION**

**Training Outline**

1. As a Mission Scanner trainee, knowledge of safety during taxiing is essential. *All crewmembers should assist the pilot while taxiing.* The pilot should brief each crewmember on what direction he or she should look out the aircraft. Sterile cockpit rules are in effect, so the crew should limit their conversation to the task at hand. Report conflicts to the pilot immediately, using the "clock position" method.

- a. Maintain adequate clearance from obstacles.
- b. When taxiing within 10 feet of obstacles stop, and then proceed no faster than a slow walk.
- c. If available, use marshallers or a "wing walker."
- d. Potential collisions with other aircraft or vehicles.
- e. Stay on or find the taxiway. At night or under low visibility conditions, assist the pilot. Some smaller airports do not mark their taxiways or the paint may be faded.

2. Runway markings are white and taxiways are yellow. Taxiway centerlines are solid yellow. Some taxiway boundaries are marked with double yellow lines while others have blue lights or cones.

3. Mandatory signs have a red background with a white inscription, and are used to denote an entrance to a runway or critical area where an aircraft is prohibited from entering without ATC permission:

- a. Holding position for a runway. Do not cross without ATC permission.  
May have a row of red stop bar lights, embedded in the pavement and extending across the taxiway at the runway holding position. When illuminated they designate a runway hold position: never cross a red illuminated stop bar, even if cleared by ATC.

**15-33**

- b. Holding position for approach area. Do not cross without ATC permission.

**15-APCH**

- c. Holding position for instrument landing system. Do not cross without ATC permission.

**ILS**

- d. No entry. These are typically placed on a one-way taxiway or at the intersection of vehicle roadways that can be mistaken for a taxiway.




4. Holding position marking for runway boundary. Four yellow lines: two solid and two dashed. The aircraft approaches the dashed lines and stops behind the solid lines (ensures you do not enter the runway). Do not cross without ATC permission. When exiting the runway, the pilot should cross the dashed lines to make sure the aircraft is completely clear of the runway.

May have yellow clearance bar lights embedded in the pavement to indicate a hold point, or may have flashing yellow guard lights elevated or in-pavement at runway holding positions.



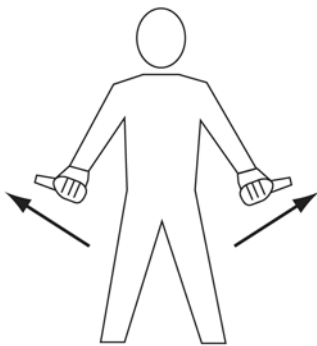
5. Location signs are used to identify either a taxiway (letters) or runway (numbers) on which an aircraft is located, or to provide a visual clue to the aircrew when the aircraft has exited an area:



6. Direction signs give a yellow background with a black inscription.



7. Ground crew use hand signals to help direct pilots during taxi operations. The scanner should be familiar with these signals in order to increase safety during taxiing and parking:



Outward motion with thumbs.  
**PULL CHOCKS**



Circular motion of right hand at head level with left arm pointing to engine.  
**START ENGINE**



Raise arm, with fist clenched, horizontally in front of body, and then extend fingers.  
**RELEASE BRAKE**




Thumb Up.  
**OK or YES**



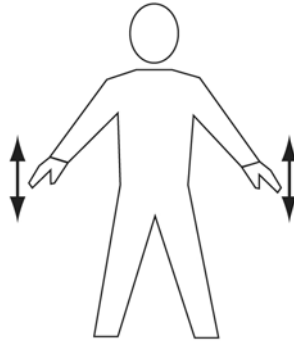
Thumb Down.  
**NOT OK or NO**



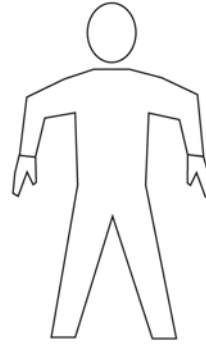
Arms above head in vertical position with palms facing inward. **THIS MARSHALLER**




Arms a little aside, palms facing backwards and repeatedly moved upward and backward from shoulder height. **MOVE AHEAD**



Arms down with palms toward ground, then moved up and down several times. **SLOW DOWN**



Arms extended with forearm perpendicular to ground. Palms facing body. **HOT BRAKES**



Arms extended with forearm perpendicular to ground. Palms facing body. Gesture indicates right side. **HOT BRAKES - RIGHT**




Arms extended with forearm perpendicular to ground. Palms facing body. Gesture indicates left side. **HOT BRAKES - LEFT**



Waiving arms over head. **EMERGENCY STOP**



Right or left arm down, other arm moved across the body and extended to indicate direction of next marshaller. **PROCEED TO NEXT MARSHALLER**




Point right arm downward, left arm repeatedly moved upward-backward. Speed of arm movement indicating rate of turn. **TURN TO THE LEFT**



Point left arm downward, right arm repeatedly moved upward-backward. Speed of arm movement indicating rate of turn. **TURN TO THE RIGHT**

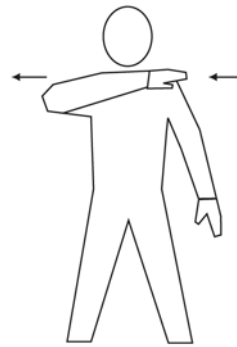


Arms crossed above the head, palms facing forward. **STOP**

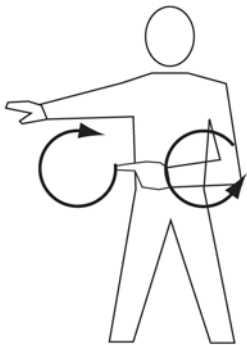


Make a chopping motion with one hand slicing into the flat and open palm of the other hand. Number of fingers extended on left hand indicates affected engine.

**FEATHER / FUEL SHUT-OFF**



Either arm and hand level with shoulder, hand moving across throat, palm downward. **CUT ENGINES**



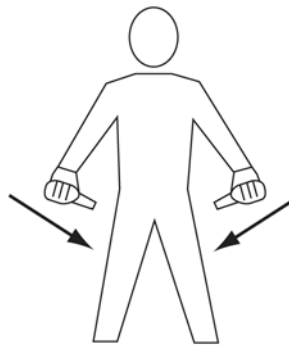
Make rapid horizontal figure-eight motion at waist level with either arm, pointing at source of fire with the other.

**FIRE ONBOARD**




Raise arm and hand, with fingers extended horizontally in front of the body, then clench fist.

**ENGAGE BRAKE**



Inward motion with thumbs.

**INSERT CHOCKS**



Right arm raised with elbow at shoulder height with palm facing forward.

**MARSHALLER**

### Additional Information

More detailed information on this topic is available in Chapter 2 and Attachment 2 of the *Mission Scanner Reference Text*.

### Evaluation Preparation

**Setup:** Provide the trainee access to airport signs and markings (pictures may be used) and someone to give flightline hand signals.

**Brief Student:** You are a Scanner trainee asked about safety during taxiing.

### Evaluation

<u>Performance measures</u>	<u>Results</u>	
1. Discuss the safety rules used to avoid obstacles during taxiing.	P	F
2. Discuss the sterile cockpit rules and how you would point out an obstacle.	P	F
3. State the difference between runway and taxiway markings.	P	F
4. Identify mandatory signs and discuss their meaning.	P	F
5. Identify holding position markings and discuss their meaning.	P	F
6. Identify location and direction signs and discuss their meaning.	P	F
7. Recognize flightline hand signals.	P	F

Student must receive a pass on all performance measures to qualify in this task. If the individual fails any measure, show what was done wrong and how to do it correctly.

**MS O-2017**  
**DEMONSTRATE POST-CRASH ACTIONS**

**CONDITIONS**

You are a Mission Scanner trainee and must demonstrate basic post-crash actions, and discuss survival equipment and urgent care.

**OBJECTIVES**

Demonstrate basic post-crash actions, identify and discuss survival equipment and urgent care.

**TRAINING AND EVALUATION**

**Training Outline**

1. As a Mission Scanner trainee, knowledge of basic survival techniques and urgent care is essential.
2. In the event of an off field landing, the crew will follow aircraft emergency procedures prior to the landing.
  - a. The pilot will review emergency egress procedures, the observer (right seat) will prop open the right door (headsets work nicely), and all crewmembers will tighten their seatbelts and shoulder harnesses. If the doors become jammed after the landing, kick them open or exit through the windows.
  - b. Afterwards, get clear of the aircraft if there is any danger (e.g., a fire). Check everyone for injuries and, as a precaution, sip some water to prevent shock.
3. Once the immediate danger is past, turn your attention to rescue. Hopefully the pilot or observer was able to communicate your position. In any case don't become impatient and leave the site, *as your best chance of discovery is to stay near the aircraft*. If rescue isn't expected shortly turn your attention to water, shelter and food (in that order). Remember, **your will to survive is your greatest asset**.
4. Survival. Water is your most important survival resource; always carry some with you plus a means to purify water (if water is available in the terrain you're flying over). Signaling equipment is also essential. For daytime use, nothing outperforms a signal mirror; at night a beacon or strobe works best. Handheld radios and personal ELTs are also very helpful. If you have no signaling device and you need to improvise, remember the "CLASS" acronym:
  - a. Color: make it an unnatural or highly contrasting one (not some color seen in your terrain).
  - b. Location: put it where it can be seen most easily, usually high and in open areas.
  - c. Angles: use angles not found in your terrain.
  - d. Size: make it large, at least 12 feet in height.
  - e. Shape: make it eye-catching.
5. Survival equipment. Know what is in your aircraft's survival kit. As a minimum it should include:
  - a. Water or a means of purifying water.
  - b. Signal mirror and a strobe light.
  - c. Space blankets for each crewmember.
  - d. Rations (e.g., MREs).
  - e. First aid kit and manual.
  - f. Survival manual (matched to your terrain).
  - g. Matches or fire starter.
  - h. Compass.
  - i. Knife.

6. It is also a good idea to carry a personal survival kit, particularly if you routinely fly over difficult or desolate terrain. Some items are:

- a. Multi-function tool such as a *Leatherman*.
- b. Matches or fire starter.
- c. Pocket compass.
- d. Plastic or metal container.
- e. Sewing needles and thread.
- f. Chapstick and sun block.
- g. Bar surgical soap (or soap containing *physohex*).
- h. A small shelter.
- i. Personal medicine(s).
- j. Nice to have items are:
  - 1) Hand held radio
  - 2) Portable GPS
  - 3) Personal ELT
  - 4) Plastic water bottle
  - 5) Aluminum foil

7. Urgent care. The only type of medical aid that should be administered is reasonable urgent care deemed necessary to save a life or prevent human suffering. However, if you are prepared to help others you will be better prepared to care for yourself. Urgent care courses are readily available so take advantage of them. Always limit your actions to those for which you have been trained. That said, the following are four important measures to take in the event of injury:

- a. Do not move an injured person unless it is absolutely necessary to save their life (e.g., fire, smoke or noxious fumes, falling, or flooding).
- b. Ensure the victim has an open airway and give mouth-to-mouth respiration if necessary.
- c. Check for a pulse and perform CPR if necessary.
- d. Locate and control severe bleeding.

8. Once urgent care has been administered, the following can be done:

- a. Do not move an injured person unless it is absolutely necessary.
- b. Do not let the victim get up and move around.
- c. Protect the victim from unnecessary manipulation and disturbance.
- d. Avoid or overcome chilling by using blankets or cover.
- e. Determine all injuries and administer care.
- f. Plan actions according to the nature of the injuries, the needs of the situation, and the availability of human and material resources.

### **Additional Information**

Some more information on this topic is available in Chapter 3 of the *Mission Scanner Reference Text*.

### **Evaluation Preparation**

**Setup:** Provide the student access to an aircraft with survival gear.

**Brief Student:** You are a Scanner trainee asked about post-crash actions, basic survival and urgent care.

## Evaluation

### Performance measures

### Results

- |  |   |   |
|--|---|---|
| 1. Discuss actions to take before and immediately after an off field landing.          | P | F |
| 2. Identify and discuss basic survival techniques and equipment.                       | P | F |
| 3. Discuss basic urgent care, including four important measures for treating injuries. | P | F |

Student must receive a pass on all performance measures to qualify in this task. If the individual fails any measure, show what was done wrong and how to do it correctly.

**MS O-0218**  
**OPERATE THE AIRCRAFT COMMUNICATIONS EQUIPMENT**

**CONDITIONS**

You are a Mission Scanner trainee and must operate and discuss the aircraft communications equipment.

**OBJECTIVES**

Demonstrate basic knowledge and use of the aircraft communications radios and the CAP FM radio.  
Demonstrate how to set up the audio panel to use the radios.

**TRAINING AND EVALUATION**

**Training Outline**

1. As a Mission Scanner trainee, basic knowledge of aircraft communications equipment is essential. Although you will probably only use the FM radio during missions, knowledge of how to use the other communications equipment could prove very important during emergencies.
2. Aircraft radios. The radios used in CAP aircraft are normally combined with navigation receivers, and so are often referred to as "nav/comm" radios. Each radio (there are usually two) has a 'primary' and a 'standby' function (called "flip-flop"): the primary frequency is displayed on the left and the standby frequency on the right. To use a frequency it must be in the primary display; to change a frequency, it must be in the standby display. The frequencies are normally tuned in increments of 50 kilocycles, for example 119.70 or 119.75 (the last '0' is not displayed). They can also be tuned in increments of 25 kilocycles by pulling out on the tuning knob and turning, but the last '5' will not be shown in the display (e.g., 119.775 will be displayed as 119.77). Sometimes, for brevity, air traffic controllers assign such frequencies as "one-one nine point seven seven," meaning 119.775, not 119.770. The operator cannot physically tune the radio to 119.770, and this may be confusing.



3. Before transmitting on any radio, first *listen* to the selected frequency. An untimely transmission can "step on" another transmission from either another airplane or ground facility, so that *all* the transmissions are garbled. Next, mentally prepare your message so that the transmission flows naturally without unnecessary pauses and breaks (think "Who, Where and What"). You may even find it helpful to jot down what you want to say before beginning the transmission. When you first begin using the radio, you may find abbreviated notes to be a convenient means of collecting thoughts with the proper terminology. As your experience level grows, you may find it no longer necessary to prepare using written notes.
4. CAP aircraft callsigns are pronounced "CAP XX XX," where the numbers are those assigned to each Wing's aircraft. *The numbers are stated in 'group' form.* For example, the C172 assigned to Amarillo, Texas is numbered 4239, where 42 is the prefix identifying it as a Texas Wing aircraft. The callsign is thus pronounced "CAP Forty-Two Thirty-Nine." It is important to use the group form of pronunciation because FAA air traffic controllers expect it of us.
5. CAP VHF FM radio. This radio is dedicated to air to ground communications, and is normally operated by the observer or scanner. Several of the frequencies programmed into the radio are frequencies assigned to CAP by the U.S. Air Force, and are used to communicate with CAP bases and ground teams. Others are programmed at the direction of the Wing Communications Officer (e.g., mutual aid, fire, police, park service,

forest service, and department of public service); these frequencies almost always require prior permission from the controlling agency before use. You will not see any frequencies on the radio display, just channels (e.g., 001 or 019) and "Identifiers" such as 'CC1' or 'AIR 2'. Mission staff will brief the crew on what channels to use. As a scanner sitting in the back seat, you simply move the push-to-talk (PTT) switch to "talk" and release the toggle when you're finished talking.

There are currently three types of FM radios in use in the CAP fleet at this time. Refer to your aircraft's operating manual for specific details for its use. Chapter 4 of the *Mission Aircrew Reference Text* provides directions on the use of the TDFM-136.

6. Audio panel. The audio panel serves as the 'hub' of radio communications in the aircraft, and is normally set up by the pilot or observer. The scanner needs to know how to select the 'active' aircraft communications radio for transmission. The active radio is selected with the switch on the right-hand side of the panel. Select either COM 1 or COM 2 to transmit and receive on the frequency displayed in the associated radio's primary display. [Note: The FM radio is COM 3]



### Additional Information

More detailed information on this topic is available in Chapter 4 of the *Mission Scanner Reference Text*.

### Evaluation Preparation

**Setup:** Provide the student access to aircraft radios or detailed figures.

**Brief Student:** You are a Scanner trainee asked about using the aircraft radios.

### Evaluation

<u>Performance measures</u>	<u>Results</u>	
1. Demonstrate how to enter a frequency and use the aircraft communications radios.	P	F
2. Discuss the importance of listening before transmitting, and basic message format.	P	F
3. Demonstrate proper use of the CAP aircraft callsign.	P	F
4. Demonstrate how to select a channel and use the CAP FM radio.	P	F
5. Demonstrate selecting a radio on the audio panel to transmit on an aircraft radio.	P	F
6. Demonstrate transmitting on the FM radio from the back seat.	P	F

Student must receive a pass on all performance measures to qualify in this task. If the individual fails any measure, show what was done wrong and how to do it correctly.

**MS O-2019**  
**DEMONSTRATE PROPER NUMBER AND CHARACTER PRONUNCIATION**

**CONDITIONS**

You are a Mission Scanner trainee and must demonstrate proper pronunciation of numbers and characters when talking on the radios.

**OBJECTIVES**

Demonstrate proper pronunciation of numbers and characters when talking on the radios.

**TRAINING AND EVALUATION**

**Training Outline**

1. As a Mission Scanner trainee, knowledge of proper number and character pronunciation is essential for communicating on the radios.
2. Numbers. The table shows how to pronounce numbers over the radio:

Numeral	Pronunciation	Numeral	Pronunciation
0	<u>ZE</u> -RO	5	<u>FIFE</u>
1	<u>WUN</u>	6	<u>SIX</u>
2	<u>TOO</u>	7	<u>SEV</u> -EN
3	<u>THU</u> -REE	8	<u>AIT</u>
4	<u>FOW</u> -ER	9	<u>NIN</u> -ER

3. Characters. The audio panel serves as the 'hub' of radio communications in the aircraft, and is normally set up by the pilot or observer. The scanner needs to know how to select the 'active' aircraft communications radio for transmission. The active radio is selected with the switch on the right-hand side of the panel. Select either COM 1 or COM 2 to transmit and receive on the frequency displayed in the associated radio's primary display (COM 3 is the FM radio).

THE ICAO PHONETIC ALPHABET						
Letter	Word	Pronunciation		Letter	Word	Pronunciation
A	ALPHA	<u>AL</u> -FAH		N	NOVEMBER	<u>NO</u> -VEM-BER
B	BRAVO	<u>BRAH</u> -VOH		O	OSCAR	<u>OSS</u> -CAH
C	CHARLIE	<u>CHAR</u> -LEE		P	PAPA	<u>PAH</u> -PAH
D	DELTA	<u>DELL</u> -TAH		Q	QUEBEC	<u>KEH</u> -BECK
E	ECHO	<u>ECK</u> -OH		R	ROMEO	<u>ROW</u> -ME-OH
F	FOXTROT	<u>FOX</u> -TROT		S	SIERRA	<u>SEE</u> -AIR-RAH
G	GOLF	<u>GOLF</u>		T	TANGO	<u>TANG</u> -GO
H	HOTEL	<u>HOH</u> -TELL		U	UNIFORM	<u>YOU</u> -NEE-FORM
I	INDIA	<u>IN</u> -DEE-AH		V	VICTOR	<u>VIK</u> -TAH
J	JULIET	<u>JEW</u> -LEE-ETT		W	WHISKEY	<u>WISS</u> -KEY
K	KILO	<u>KEY</u> -LOH		X	XRAY	<u>ECKS</u> -RAY
L	LIMA	<u>LEE</u> -MAH		Y	YANKEE	<u>YANG</u> -KEY
M	MIKE	<u>MIKE</u>		Z	ZULU	<u>ZOO</u> -LOO

### **Additional Information**

More detailed information on this topic is available in Chapter 4 of the *Mission Scanner Reference Text*.

### **Evaluation Preparation**

**Setup:** Provide the student access to a radio (may be simulated).

**Brief Student:** You are a Scanner trainee asked to correctly pronounce numbers and characters as you would when using a radio.

### **Evaluation**

#### Performance measures

#### Results

- |  |   |   |
|--|---|---|
| 1. Demonstrate how to pronounce numbers while talking on a radio.    | P | F |
| 2. Demonstrate how to pronounce characters while talking on a radio. | P | F |

Student must receive a pass on all performance measures to qualify in this task. If the individual fails any measure, show what was done wrong and how to do it correctly.

**MS O-2020**  
**USE PROWORDS AND CODE WORDS**

**CONDITIONS**

You are a Mission Scanner trainee and must demonstrate proper use of prowords and code words when talking on the radios.

**OBJECTIVES**

Properly use prowords and code words when talking on the radios.

**TRAINING AND EVALUATION**

**Training Outline**

1. As a Mission Scanner trainee, knowledge of proper use of prowords and code words is essential for communicating on the radios.
2. Prowords. Prowords are pronounceable words and phrases that have been assigned a meaning for the purpose of expediting communications on radiotelephone circuits. The table shows samples of the most common prowords.

<b>TERM</b>	<b>DEFINITION or MEANING</b>
AFFIRMATIVE	Yes.
ALL AFTER	The portion of the message that follows (word).
ALL BEFORE	The portion of the message that precedes (word).
BREAK	I hereby indicate the separation of the text from other portions of the message.
COPY	I understand.
CORRECT	You are correct, or what you have transmitted is correct
CORRECTION	An error has been made in this transmission. Transmission will continue with the last word correctly transmitted.
DISREGARD	The last transmission was in error. Disregard it.
DISREGARD THIS TRANSMISSION	This transmission is in error. Disregard it. This proword should not be used to cancel any message that has been completely transmitted and for which receipt or acknowledgment has been received.
EXEMPT	The addresses immediately following are exempted from the collective call.
FIGURE(s)	Numerals or numbers follow.
FROM	The originator of this message is the address designator that follows.
I READ BACK	The following is my response to your instructions to read back.
I SAY AGAIN	I am repeating transmission or portion indicated.
I SPELL	I shall spell the next word phonetically.
I VERIFY	That which follows has been verified at your request and is repeated. To be used only as a reply to VERIFY.
INFO	The addressees immediately following are addresses for information.
INITIALS	Personal initials shall be spoken phonetically prefixed by the word "INITIALS."
MESSAGE FOLLOWS	A message that requires recording is about to follow. Transmitted immediately after the call. (This proword is not used on nets primarily employed for conveying messages. It is intended for use when messages are passed on tactical or reporting nets.)
MORE TO FOLLOW	Transmitting station has additional traffic for the receiving station.
NEGATIVE	No or "permission not granted" or "that is not correct."
OUT	This is the end of my transmission to you and no answer is required

TERM	DEFINITION or MEANING
	or expected.
OVER	This is the end of my transmission to you and a response is necessary. Go ahead; transmit.
PRIORITY	Precedence PRIORITY.
READ BACK	Repeat my message back to me. A request to repeat instructions back to the sender, for the purpose of confirmation. Also, the receiver's reply, repeating the instructions, as in: "Read back is as follows..."
RED CAP	Precedence RED CAP.
RELAY (TO)	Re-transmit this message to...
ROGER	I have received and understand all of your last transmission. This should not be used to answer a question requiring a yes or no answer.
ROUTINE	Precedence ROUTINE.
SAY AGAIN	Repeat all of your last transmission. Followed by identification data means "Repeat _____ (portion indicated)."
SPEAK SLOWER	Your transmission is at too fast a speed. Reduce speed of transmission.
SPELL, or I SPELL	Please spell, or "I shall spell the next word phonetically."
STANDBY	I must pause for a few seconds.
THIS IS	This transmission is from the station whose designator immediately follows.
TIME	That which immediately follows is the time or date-time group of the message.
TO	The addressees immediately following are addressed for action.
VERIFY	Verify entire message (or portion indicated) with the originator and send correct version. To be used only at the discretion of or by the addressee to which the questioned message was directed.
WAIT	I must pause for a few seconds.
WAIT OUT	I must pause longer than a few seconds.
WILCO	I have received your signal, understand it, and will comply. To be used only by the addressee. <i>Since the meaning of ROGER is included in that of WILCO, these two prowords are never used together.</i>
WORD AFTER	The word of the message to which I have reference is that which follows _____.
WORD BEFORE	The word of the message to which I have reference is that which precedes _____.
WORDS TWICE	Communication is difficult. Transmit each phrase or each code group twice. This proword may be used as an order, request, or as information.

3. Code words. Because the frequencies CAP normally uses are not secure, code words and phrases are sometimes used to prevent unauthorized parties from obtaining the information and possibly compromising mission integrity. The incident commander may assign code words and phrases for mission members to use when transmitting important mission information, such FM frequencies or when sighting the target aircraft, its location, and whether there are survivors.

### Additional Information

More detailed information on this topic is available in Chapter 4 of the *Mission Scanner Reference Text*.

### Evaluation Preparation

**Setup:** Provide the student access to a radio (may be simulated).

**Brief Student:** You are a Scanner trainee asked to correctly use prowords, and discuss why code words may be used.

## Evaluation

### Performance measures

### Results

1. Demonstrate understanding and use of prowords while talking on a radio.
2. Discuss the use of code words.

P F  
P F

Student must receive a pass on all performance measures to qualify in this task. If the individual fails any measure, show what was done wrong and how to do it correctly.

**MS O-2021**  
**INTREPRET EMERGENCY SIGNALS AND DEMONSTRATE AIR/GROUND TEAM**  
**COORDINATION**

**CONDITIONS**

You are a Mission Scanner trainee and must interpret emergency signals and demonstrate how to coordinate with ground teams.

**OBJECTIVES**

Interpret emergency signals and demonstrate and discuss air and ground team coordination plans and techniques.

**TRAINING AND EVALUATION**

**Training Outline**

1. As a Mission Scanner trainee, the ability to interpret emergency signals plus the ability to coordinate with ground teams is essential.
2. While you are on a mission, nonverbal signals may be the only available method of communication (e.g., with a crash survivor or with ground units). Scanners have to interpret these nonverbal messages and must be able to do so accurately regardless of the method used. [Note: You are not required to have these signals memorized, but should be familiar with their use. These tables and figures should be carried in each CAP aircraft; see Attachment 2 of the *Mission Aircrew Reference Texts* for examples.]

Light gun signals. If the radio in your aircraft fails, it is still very important for you to follow instructions from the tower at a controlled airport. In this case, you may have to rely on light gun signals from the control tower in order to receive the necessary landing and taxi clearances previously described. These clearance requirements still apply despite an inoperative radio. The table shows each light gun signal, followed by its meaning.

<b>Color and Type of Signal</b>	<b>On the Ground</b>	<b>In Flight</b>
Steady Green	Cleared for takeoff	Cleared to land
Flashing Green	Cleared to taxi	Return for landing
Steady Red	Stop	Give way to other aircraft and continue circling
Flashing Red	Taxi clear of runway area	Airport unsafe—Do not land
Flashing White	Return to starting place on airport	Not applicable
Alternating Red and Green	General warning — exercise extreme caution	

Body signals. The use of the body is one of the most common means of sending messages. These signals are called "body signals" since they involve the whole body, not just arm movements. They are easy to use because no special materials are needed.



Wave Both arms across face

**DO NOT ATTEMPT TO LAND**



Both arms held over head

**PICK UP - PLANE IS ABANDONED**



Cup hands over ears

**OUR RECEIVER IS WORKING**



Lie flat on back with hands above head

**NEED MEDICAL ASSISTANCE**



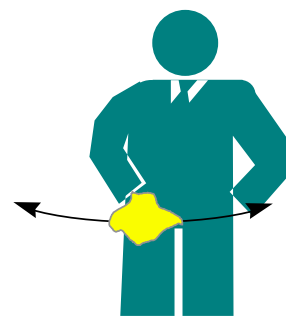
Both arms horizontal

**NEED MECHANIC HELP or PARTS**



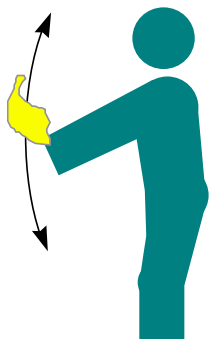
Wave one arm over head

**ALL OK - DO NOT WAIT**



Wave cloth horizontally

**NEGATIVE - NO**



Wave cloth vertically

**AFFIRMATIVE - YES**



Both arms pointing in the direction of landing while squatting  
**LAND IN THIS DIRECTION**

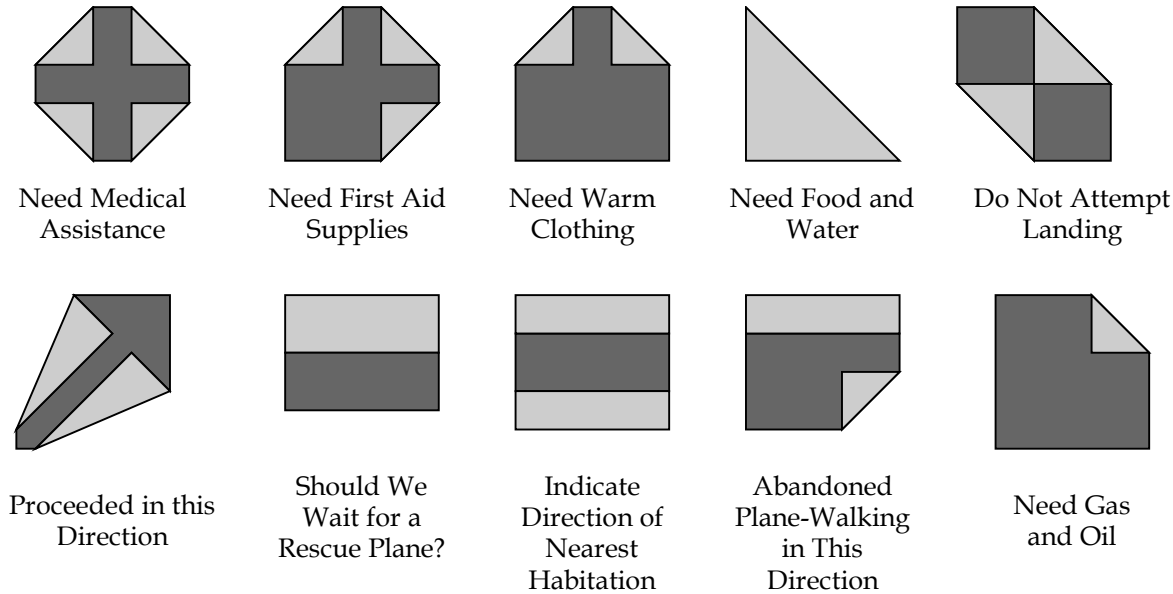


One arm horizontal

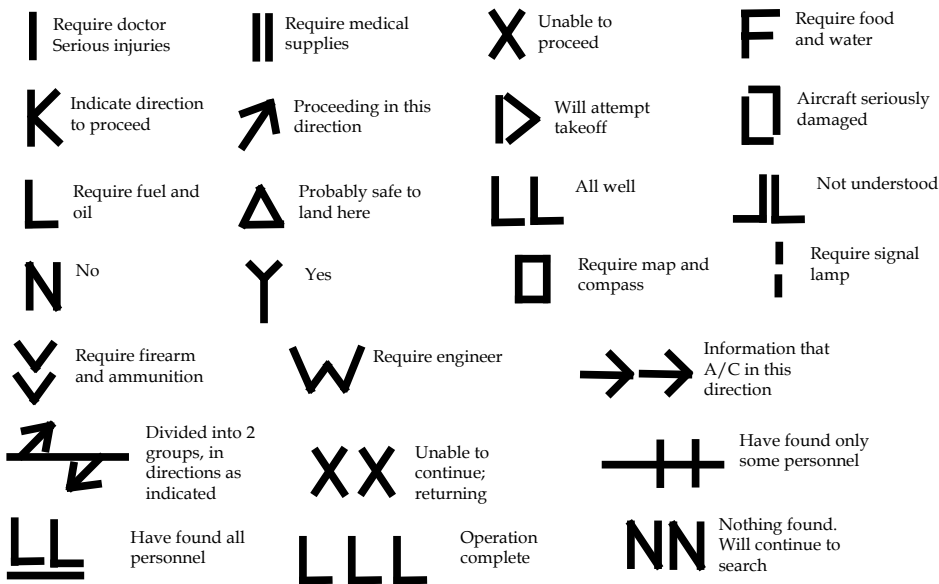
**WAIT IF PRACTICAL**

A "Paulin" is a short form of tarpaulin, which means waterproof canvas. If the victims of an accident are fortunate enough to have some paulin material, they may be able to aid the rescuers greatly by sending signals

with it. If the paulins are laid in clear areas wherein their colors cause high contrasts, they can be seen from substantial distances.



The standard emergency distress signals shown below may be constructed using strips of fabric, pieces of wood, stones, wreckage parts, or any other available material. Each letter should be two to three feet wide and six to twelve feet long, with colors that contrast with the background, if possible.



3. Coordinating with ground teams. Naturally, the best means of working with a ground team is to use the radio. As a scanner you should continuously have your eyes on the ground team; this frees the pilot to fly the aircraft and allows the observer to work the radio to execute the coordination. The observer will likely also have to be the one who keeps track of where you “left” your target. Sometimes you may be the one using the radio.

- a. It is important to understand that you have the advantage of perspective; the long-range visibility that is inherent to flying is absent from the ground. You can see over the hills, trees, and other obstacles that are blocking the ground team member's sight, so you may have to explain the situation to the ground pounder in painstaking detail.

- b. Another perspective problem is time: time seems to pass very slowly while waiting for a ground team, and it is easy to get impatient and leave station prematurely.
  - c. Sometimes the ground team member (non-CAP, of course) may not understand radio jargon, so use plain English. For example, if you wanted a ground team to take a left at the next intersection, what would you say? How about “Ground Team 1, CAP 4239, turn left at the next intersection, over.” The plain English answer is the correct way to say it in radioese, anyway.
4. It is important to brief the mission with the ground team, if possible, and at least agree on communications frequencies and lost-comm procedures, maps/charts to be used by *both* teams, determine what vehicle the ground team is driving (e.g., type, color, and any markings), determine what the ground team members are wearing (highly visible vests are preferred), and a rendezvous point and time window for rendezvous (+/- 15 minutes). One tried-and-true method is to rendezvous at a landmark that both the aircrew and the ground team can *easily* identify. A common rendezvous point is an intersection of prominent roads; these are easily identifiable by both the aircrew and ground team. The rendezvous location should be set up before you leave.
5. Also, ground teams that have a hand-held GPS can radio their latitude and longitude coordinates to you and say, “Come and get me!” If you are unable to loiter over the target and bring the ground team to it, you can simply radio the coordinates to the ground team and let them navigate to it on their own. This is not nearly as efficient, however, as when you lead them to it. Note that two pieces of technology have to be working properly to make this work: 1) both air and ground operators need to be proficient with their GPS units and 2) two-way radio communication must be established and maintained.
6. It is important to plan for a loss of communications during the briefing. The teams should agree on pre-arranged signals such as: stopping the vehicle means lost comm; blinking headlights indicate the message has been received; and operating the flashers means the message hasn't been received. The pilot has some techniques that can be used to guide a ground team during lost communications.

### **Additional Information**

More detailed information on this topic is available in Chapter 4 of the *Mission Scanner Reference Text*.

### **Evaluation Preparation**

**Setup:** Provide the trainee with an aircrew and ground team.

**Brief Student:** You are a Scanner trainee asked to interpret emergency signals and coordinate with ground units.

## Evaluation

### Performance measures

### Results

- |   |   |   |
|---|---|---|
| 1. Interpret the following emergency signals (may be performed on the ground):    | P | F |
| a. Light gun signals  |   |   |
| b. Body signals   |   |   |
| c. Paulin signals   |   |   |
| d. Distress signals   |   |   |
| 1. Discuss scanner responsibilities during a combined air/ground team mission.    | P | F |
| 2. Discuss factors to consider before you or the ground team leaves mission base. | P | F |
| 3. Demonstrate basic ground team coordination.                                    | P | F |

Student must receive a pass on all performance measures to qualify in this task. If the individual fails any measure, show what was done wrong and how to do it correctly.

**MS O-2022**  
**DEMONSTRATE SCANNING PATTERNS AND LOCATE TARGETS**

**CONDITIONS**

You are a Mission Scanner trainee and must use scanning patterns to locate targets.

**OBJECTIVES**

Use proper scanning patterns to locate an object and a person on the ground.

**TRAINING AND EVALUATION**

**Training Outline**

1. As a Mission Scanner trainee, the ability to use proper scanning patterns to locate objects on the ground is essential. Scanning is the process of investigating, examining, or checking by systematic search. In search and rescue operations, the scanner visually searches for distress signals or accident indications by using a systematic eye movement pattern. Refer to Chapter 5 of the *Mission Scanner Reference Text* for figures.

2. Vision. The brain actively senses and is aware of everything from the point outward to form a circle of 10 degrees (visual acuity outside of this cone of vision is only ten percent of that inside the cone). This is central vision, produced by special cells in the fovea portion of the eye's retina. Whatever is outside the central vision circle also is "picked up" by the eyes and conveyed to the brain, but it is not perceived clearly. This larger area is called peripheral vision; cells less sensitive than those in the fovea produce it. For example, an object that is visible one mile away using central vision would only be visible 500 feet away using peripheral vision. However, objects within the peripheral vision area can be recognized if mental attention is directed to them.

Note that peripheral vision is very important at night, and is also important in picking up structures such as towers.

3. Fixation area. The fixation area is the area in which "concentrated" looking takes place. If the search objective happens to come within this fixation area, you probably will recognize it. For central vision to be effective, the eye must be focused properly. This focusing process takes place each time the eyes, or head and eyes, are moved. When you are not actively focusing while looking outside the aircraft, your focal point will be a point about 30 feet out. Thus, daydreaming or thinking about other things while you are supposed to be looking for the target will guarantee you will not see the target even if your eyes are pointed right at it!

4. Fixation points and lines of scan. When you wish to scan a large area, your eyes must move from one point to another, stopping at each point long enough to focus clearly. Each of these points is a fixation point. When the fixation points are close enough the central vision areas will touch or overlap slightly. Spacing of fixation points should be 3 or 4 degrees apart to ensure the coverage will be complete. Consciously moving the fixation points along an imaginary straight line produces a band of effective "seeing."

5. Fixation area. The goal of scanning techniques is to thoroughly cover an assigned search area. Reaching this goal on a single overflight is not possible for a number of reasons. First, the eye's fixation area is a circle and the search area surface (ground) is flat. Coverage of a flat surface with circles requires much overlapping of the circles. This overlapping is not possible on a search mission because of the aircraft's motion. Also, the surface area covered by the eye's fixation area is less for the area near the airplane and increases with distance from the airplane. The net result is relatively large gaps in coverage near the airplane and some overlap as distance from the airplane increases. Angular displacement is the angle formed from a point almost beneath the airplane outward to the scanning range, or beyond. By this definition, the horizon would be at 90 degrees displacement. Although the fixation area may be a constant 10-degree diameter circle, the effectiveness of

sighting the objective decreases with an increase in this angular displacement. Said another way, your ability to see detail will be excellent at a point near the aircraft, but will decrease as the angular displacement increases. At the scanning range, at which the angular displacement may be as much as 45 degrees, the resolution of detail area probably will have shrunk to a 4-degree diameter circle. This is why having scanners looking out both sides of the aircraft is optimal. With track spacing (explained later) proper for the given search visibility, each scanner will look at roughly the same area (i.e., double coverage).

6. Field of scan. The area that you will search with your eyes in lines of scan is called the field of scan. The upper limit of this field is the line that forms the scanning range. The lower limit is the lower edge of the aircraft window, while the aft (back) limit is usually established by the vertical edge of the aircraft window. The forward (front) limit for a field of scan will vary. It might be established by a part of the airplane (such as a wing strut). Or, when two scanners are working from the same side of the airplane it might be limited by an agreed-upon point dividing the field of scan.

7. Scanning range. We are using the term "scanning range" to describe the distance from an aircraft to an imaginary line parallel to the aircraft's ground track (track over the ground.) This line is the maximum range at which a scanner is considered to have a good chance at sighting the search objective.

Scanning range sometimes may be confused with search visibility range. Search visibility range is that distance at which an object the size of an automobile can be seen and recognized. Aircraft debris may not be as large as an automobile and may not be immediately recognizable as aircraft debris, particularly when the aircraft is flying at 100 mph. Therefore, scanning range may be less than but never greater than the search visibility (in CAP searches, we rarely credit a search visibility of greater than three or four nautical miles).

If your pilot states that the search altitude will be 500 feet above the ground level (AGL), you can expect your scanning range to be  $\frac{1}{4}$  to  $\frac{1}{2}$  mile. If the search altitude is 1,000 feet AGL, you can expect a scanning range of between  $\frac{1}{2}$  and 1 mile. Even so, there are many variables that affect both the effective scanning range and your probability of detecting the search objective. These issues are discussed later.

8. Scanning patterns. To cover the field of scan adequately requires that a set pattern of scan lines be used. Research into scanning techniques has shown that there are two basic patterns that provide the best coverage. These are called the *diagonal pattern* and the *vertical pattern*. The diagonal pattern is the better of the two.

The diagonal pattern begins with the first fixation point slightly forward of the aircraft's position, and the scanner moves her fixation points sequentially back toward the aircraft. The next scan line should be parallel to the first, and so on. Each succeeding scan line is started as quickly as possible after completing the previous one. Remember, the duration of each fixation point along a scan line is about  $\frac{1}{3}$  second: how long it takes to complete one scan line depends on the distance at which the scanning range has been established. Also, the time required to begin a new scan line has a significant influence on how well the area nearest the airplane is scanned. In other words, more time between starting scan lines means more space between fixation points near the airplane.

The vertical pattern is somewhat less effective. You should use this pattern only from a rear seat position, and the first fixation point should be as near to underneath the airplane as you can see. Subsequent fixation points for this first scan line should progress outward to the scanning range and back. This scanning pattern traces a "sawtooth" shape on the surface.

Note: If there are two scanners on the same side of the airplane, it is good practice to combine the diagonal and vertical patterns. As agreed between scanners, one would use the diagonal pattern and the other the vertical pattern. However, the scanner using the vertical pattern *would not* scan to the scanning range. Some distance short of the scanning range would be selected as the vertical pattern limit. This technique provides good coverage of the surface area near the search aircraft.

### Additional Information

More detailed information and pictures on this topic are available in Chapter 5 of the *Mission Scanner Reference Text*.

### Evaluation Preparation

**Setup:** Provide the student with an aircraft and aircrew (scanning techniques may be simulated on the ground).

Place a target (preferably to simulate aircraft wreckage) in the search area, and have a person (or mannequin) in the same general area. Fly the search area at 1000' AGL and 90-100 knots.

**Brief Student:** You are a Scanner trainee asked to demonstrate scanning patterns and locate targets in a search area.

### Evaluation

<u>Performance measures</u>	<u>Results</u>	
1. Define "scanning" and "fixation," and describe how aircraft motion effects scanning.	P	F
2. Demonstrate knowledge of central and peripheral vision, and describe where your focal point is when your eyes are relaxed.	P	F
3. Demonstrate knowledge of fixation points and lines of scan, and define "scanning range."	P	F
4. Demonstrate diagonal and vertical scanning patterns.	P	F
5. Locate a target in a search area.	P	F
6. Locate a person in a search area.	P	F

Student must receive a pass on all performance measures to qualify in this task. If the individual fails any measure, show what was done wrong and how to do it correctly.

**MS O-2023**  
**DEMONSTRATE TECHNIQUES TO REDUCE FATIGUE**

**CONDITIONS**

You are a Mission Scanner trainee and must demonstrate and discuss how to minimize fatigue.

**OBJECTIVES**

Demonstrate techniques to minimize fatigue, and how you would direct the pilot during flight.

**TRAINING AND EVALUATION**

**Training Outline**

1. As a Mission Scanner trainee, knowing how to minimize fatigue is essential. The art of scanning is more physically demanding and requires greater concentration than mere sight seeing. In order to maintain scanning effectiveness you must be aware of your own fatigue level. The following can help maintain scanning effectiveness:
  - a. Change scanning positions at 30- to 60-minute intervals, if aircraft size permits.
  - b. Rotate scanners from one side of the aircraft to the other, if two or more scanners are present.
  - c. Find a comfortable position, and move around to stretch when necessary.
  - d. Clean aircraft windshields and windows. Dirty windows accelerate the onset of eye fatigue, and can reduce visibility by up to 50 percent.
  - e. Scan through open hatches whenever feasible.
  - f. At night, use red lights and keep them dimmed to reduce reflection and glare.
  - g. Use binoculars (sparingly) to check sightings.
  - h. Focus on a close object (like the wing tip) on a regular basis. The muscles of the eye get tired when you focus far away for an extended period of time.
  - i. Rest during turns outside the search area.
  
2. The "clock position" system is used to describe the relative positions of everything outside the airplane, with the nose of the aircraft being "12 o'clock." The system considers positions to be on a horizontal plane that is centered within the cockpit, and any object above or below this plane is either "high" or "low."

**Additional Information**

More detailed information on this topic is available in Chapter 5 of the *Mission Scanner Reference Text*.

**Evaluation Preparation**

**Setup:** Provide the student access to an aircraft (may simulate on the ground).

**Brief Student:** You are a Scanner trainee asked how to minimize fatigue during searches.

**Evaluation**

<u>Performance measures</u>	<u>Results</u>
1. Discuss fatigue effects and demonstrate how to minimize fatigue.	P F
2. Describe how to direct the pilot using the "clock position" method.	P F

Student must receive a pass on all performance measures to qualify in this task. If the individual fails any measure, show what was done wrong and how to do it correctly.

**MS O-2024**  
**DEMONSTRATE USE OF SECTIONAL CHARTS**

**CONDITIONS**

You are a Mission Scanner trainee and must use the information displayed on a aeronautical sectional chart and determine heading and distance

**OBJECTIVES**

Demonstrate use of the information displayed on a sectional chart and to determine heading and distance.

**TRAINING AND EVALUATION**

**Training Outline**

1. As a Mission Scanner trainee, basic knowledge the information contained on a sectional chart and its use is essential. The most important tool you will use in both mission flight planning and execution is the chart. Highway road maps are usually not acceptable for air navigation, since most don't have detailed terrain depiction and also lack the superimposed reference system. Many aeronautical charts have such small scales that the makers are unable to show required levels of detail when trying to put a large area into a small chart space. The most useful chart that has been widely accepted for visual, low-altitude navigation is the *sectional aeronautical chart*, sometimes simply referred to as the "*sectional*". Refer to Chapter 8 of the *Mission Scanner Reference Text* for figures and a sectional aeronautical chart.
2. Sectional chart. Sectionals use a scale of one to five hundred thousand, or 1:500,000, where all features are shown 1/500,000 of their actual size (1 inch = 6.86 nm). This allows accurate depiction of both natural and cultural features without significant clutter. Sectionals portray the following:
  - a. Physical, natural features of the land, including terrain contours or lines of equal elevation.
  - b. Man-made or cultural development, like cities, towns, towers, and racetracks.
  - c. Visual and radio aids to navigation, airways, and special-use airspace.
  - d. Airports and airport data, lines of magnetic variation, controlled airspace, obstructions and other important information.
  - e. VFR waypoints.
  - f. Obstructions to flight.
3. Legend. An often overlooked but vital part of the sectional is the 'Legend.' This is a written explanation of symbols, projections, and other features used on the chart. Other important areas of the chart are its title page or "panel", and the margins around the chart edges. The margins contain supplemental radio frequency information, details about military or *special use airspace*, and other applicable regulations. The title panel identifies the region of the country shown by the chart, indicates the scale used in drawing the chart, explains elevations and contour shading, and shows the expiration date of the chart and effective date of the next issue of that chart. *It is vitally important that you keep current charts in the aircraft at all times.*
4. Interpretation. A significant part of air navigation involves interpreting what one sees on the chart, then making comparisons outside the aircraft. Basic chart symbols can be grouped into cultural features, drainage features, and relief features.

Understanding *cultural features* is straightforward, and they usually require little explanation. Villages, towns, cities, railroads, highways, airports or landing strips, power transmission lines, towers, mines, and wells are all examples of cultural features. The chart legend explains the symbols used for most cultural features, but if no standard symbol exists for a feature of navigational significance, the cartographer frequently resorts to printing the name of the feature itself, such as *factory* or *prison*, on the chart.

*Drainage features* on charts include lakes, streams, canals, swamps, and other bodies of water. On sectional charts these features are represented by lightweight solid blue lines for rivers and streams; large areas of water, such as lakes and reservoirs, are shaded light blue with the edges defined by lightweight solid blue lines. Under most conditions, the drainage features on a map closely resemble the actual bodies of water. However, certain bodies of water may change shape with the season, or after heavy rains or drought. Where this shape change occurs with predictability, cartographers frequently illustrate the maximum size expected for a body of water with light-weight, blue, dashed lines. If you intend to use drainage features for navigation, you should consider recent rains or dry spells while planning and remember the body of water may not appear exactly as depicted on the chart.

*Relief features* indicate vertical topography of the land including mountains, valleys, hills, plains, and plateaus. Common methods of depicting relief features are contour lines, shading, color gradient tints, and spot elevations. Contour lines are the most common method of depicting vertical relief on charts. The lines do not represent topographical features themselves, but through careful study and interpretation, you can predict a feature's physical appearance without actually seeing it. Each contour line represents a continuous imaginary line on the ground on which all points have the same elevation above or below sea level, or the zero contours. Actual elevations above sea level of many contour lines are designated by a small break in the line, while others are not labeled. Contour interval, or vertical height between each line, is indicated on the title panel of sectionals. Contour lines are most useful in helping us to visualize vertical development of land features. Contour lines that are grouped very closely together indicate rapidly changing terrain, such as a cliff or mountain. More widely spaced lines indicate more gentle slopes. Absence of lines indicates flat terrain. Contour lines can also show changes in the slope of terrain.

Shading is added to sectional charts to help highlight and give contrast to the contour lines. These tiny gray dots are applied adjacent to selected contour lines and give the contours a three-dimensional appearance. This makes it easier to imagine the physical appearance of the shaded topographical feature. Gradient tints, the "background" colors on charts, indicate general areas of elevation. The height range assigned to each gradient color is indicated on the title panel of each sectional chart. Areas that are near sea level are pale green, while *high terrain is color-coded a deep red/brown*. Intermediate elevations are indicated by brighter shades of green, tan, or lighter shades of red/brown.

5. Aeronautical data. The aeronautical information on the sectional charts is for the most part self-explanatory. An explanation for most symbols used on aeronautical charts appears in the margin of the chart. Additional information appears at the bottom of the chart.

Information concerning very high frequency (VHF) radio facilities such as tower frequencies, omnidirectional radio ranges (VOR), and other VHF communications frequencies is shown in blue. A narrow band of blue tint is also used to indicate the centerlines of Victor Airways (VOR civil airways between omnirange stations). Low frequency-medium frequency (LF/MF) radio facilities are shown in magenta (purplish shade of red).

Runway patterns are shown for all airports having permanent hard surfaced runways. These patterns provide for positive identification as landmarks. All recognizable runways, including those that may be closed, are shown to aid in visual identification. Airports and information pertaining to airports having an airport traffic area (operating control tower) are shown in blue. All other airports and information pertaining to these airports are shown in magenta adjacent to the airport symbol that is also in magenta.

The symbol for obstructions is another important feature. The elevation of the top of obstructions above sea level is given in blue figures (without parentheses) adjacent to the obstruction symbol. Immediately below this set of figures is another set of lighter blue figures (enclosed in parentheses) that represent the height of the top of the obstruction above ground-level. Obstructions which extend less than 1,000 feet above the terrain are shown by one type of symbol and those obstructions that extend 1,000 feet or higher above ground level are

indicated by a different symbol (see sectional chart). Specific elevations of certain high points in terrain are shown on charts by dots accompanied by small black figures indicating the number of feet above sea level. The chart also contains larger bold face blue numbers that denote Maximum Elevation Figures (MEF). These figures are shown in quadrangles bounded by ticked lines of latitude and longitude, and are represented in thousands and hundreds of feet above mean sea level. The MEF is based on information available concerning the highest known feature in each quadrangle, including terrain and obstructions (e.g., trees, towers, and antennas). Since CAP aircraft regularly fly at or below 1000' AGL, aircrews should exercise extreme caution because of the numerous structures extending up as high as 1000' – 2000' AGL. Additionally, guy wires that are difficult to see even in clear weather support most truss-type structures; these wires can extend approximately 1500 feet horizontally from a structure. Therefore, all truss-type structures should be avoided by at least 2000 feet (horizontally and vertically).

6. Determining heading and distance. To determine a heading, locate the departure and destination points on the chart and lay the edge of a special protractor, or *plotter*, along a line connecting the two points. Read the true course for this leg by sliding the plotter left or right until the center point, or grommet, sits on top of a line of longitude. When the course is more to the north or south, you can measure it by centering the grommet on a parallel of latitude, then reading the course from the inner scale that's closer to the grommet. To determine distance, use the scale that's printed on the plotter's straight edge: one edge measures nautical miles and the other statute miles.

7. Grids. CAP has adopted a standard grid system built upon the matrix of parallels of latitude and meridians of longitude and the sectional aeronautical chart. Sectional charts cover a land area approximately seven degrees of longitude in width and four degrees of latitude in height. Information pertaining to gridding can be found in Attachment E of the *U.S. National SAR Supplement to the International Aeronautical and Maritime SAR Manual* (or Attachment 1 of the Mission Aircrew Reference Texts).

The sectional grid system used by Civil Air Patrol divides each sectional's area into 448 smaller squares. This process begins by dividing the whole area into 28 *1-degree* grids, using whole degrees of latitude and longitude. Then each 1-degree grid is divided into four *30-minute* grids, using the 30-minute latitude and longitude lines. Finally, each of the 30-minute grids is divided into four *15-minute* grids, using the 15- and 45-minute latitude and longitude lines.

When circumstances require, a 15-minute grid can be divided into four more quadrants using 7 1/2 degree increments of latitude and longitude, creating four equal size grids that are approximately 7 1/2 miles square. The quadrants are then identified alphabetically - A through D - starting with the northwest quadrant as A, northeast as B, southwest as C and southeast as D. [If needed, a 7 1/2 degree grid can be further subdivided into four quadrants using the same methodology: using the 7 1/2 degree grid 'A', the quadrants would be labeled AA, AB, AC and AD.]

Another means of designating a grid system is the *Standardized Latitude and Longitude Grid System*. It has an advantage over the sectional standardized grid in that it can be used on any kind of chart that has lines of latitude and longitude already marked. In this system, 1-degree blocks are identified by the intersection of whole numbers of latitude and longitude, such as 36-00N and 102-00W: these points are always designated with the latitude first, such as 36/102, and they identify the area north and west of the intersection of these two lines. Next, the 1-degree grid is divided into four quadrants using the 30-minute lines of latitude and longitude. Label each quadrant A through D; the northwest quadrant being 36/102A, the northeast 36/102B, the southwest 36/102C, and the southeast 36/102D. Each quadrant can also be divided into four sub-quadrants, labeled AA, AB, AC, and AD, again starting with the most northwest and proceeding clockwise.

### Additional Information

More detailed information and pictures on this topic are available in Chapter 8 of the *Mission Scanner Reference Text*.

### Evaluation Preparation

**Setup:** Provide the student with a sectional chart and a plotter.

**Brief Student:** You are a Scanner trainee asked to discuss the information displayed on a sectional chart, and use the information to determine heading and distance.

### Evaluation

<u>Performance measures</u>	<u>Results</u>
1. Identify and discuss the following on an aeronautical sectional chart:	P F
a. Physical features such as topographical details.	
b. Towns, cities, highways, roads, and towers (MSL and AGL).	
c. Airways, radio aids, airports and airport data.	
d. Maximum Elevation Figures.	
e. Legend and margin information.	
2. Given a sectional and plotter, determine a heading and measure distances.	P F
3. State the size of a full and one-quarter CAP and Standardized grids.	P F

Student must receive a pass on all performance measures to qualify in this task. If the individual fails any measure, show what was done wrong and how to do it correctly.

**MS O-2025**  
**TRACK AND RECORD POSITION ON SECTIONALS AND MAPS**

**CONDITIONS**

You are a Mission Scanner trainee and must demonstrate basic use of navigational terms, determine heading and distance, and determine the position of the aircraft and ground features.

**OBJECTIVES**

Demonstrate basic knowledge and use of navigational terms. Determine the aircraft's heading and the distance between two points. Given a sectional chart, record a ground feature and transfer that location to a map.

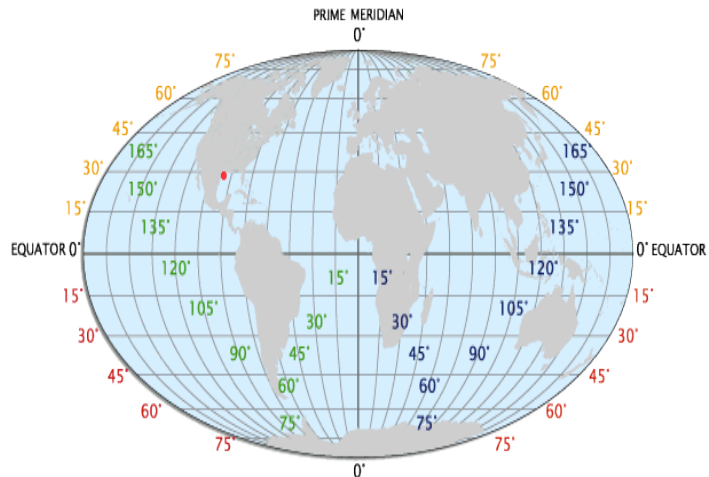
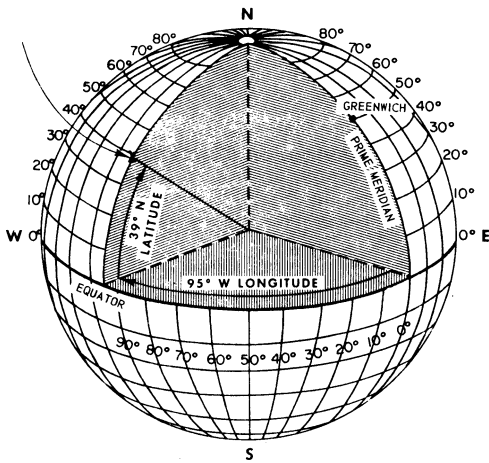
**TRAINING AND EVALUATION**

**Training Outline**

1. As a Mission Scanner trainee, a basic knowledge of navigational terms, the ability to determine heading and distance, and the ability to record a ground feature on a sectional and a map is essential. In order to effectively communicate with the pilot and ground units, the mission scanner must have a clear understanding of various terms that are used frequently when flying aboard CAP aircraft. These are not peculiar to search and rescue, but are used by all civilian and military aviators. The scanner must also be able to track the aircraft's position, and relay the location of ground features to both the pilot and observer and units on the ground.
2. Course. Course refers to the planned or actual path of the aircraft over the ground. The course can be either *true course* or *magnetic course* depending upon whether it is measured by referencing true north or magnetic north. The magnetic north pole is *not* located at the true North Pole on the actual axis of rotation, so there is usually a difference between true course and magnetic course.
3. Heading. Heading is the direction the aircraft is *physically* pointed. True heading is based on the true North Pole, and magnetic heading is based on the magnetic north pole. Most airplane compasses can only reference magnetic north without resorting to advanced techniques or equipment, so headings are usually magnetic.
6. Drift is the effect the wind has on an aircraft. The motion of the airplane relative to the surface of the earth depends upon the fact that the airplane is moving relative to an air mass and the air mass is moving relative to the surface of the earth; adding these two gives the resultant vector of the airplane moving relative to the surface of the earth. The angle between the heading and the actual ground track is called the drift angle. Drift is corrected by changing the aircraft's heading just enough to negate drift.
5. Ground track. The actual path of the airplane over the surface of the earth is called the ground track. An airplane's track over the ground doesn't always correspond with the direction it's pointed (heading). This is due to the effect of wind (drift). All GPS units will display ground track.
6. A nautical mile is about 6076 feet (sometimes rounded to 6080 feet), compared to 5280 feet for the statute mile. Most experienced aviators simply refer to a nautical mile as a mile. *Scanners and Observers should remain aware of this difference when communicating with ground search teams because most ground or surface distances are measured using statute miles or kilometers.* To convert nautical miles into statute miles, multiply nautical miles by 1.15. To find kilometers, multiply nautical miles by 1.85. Also, one nautical mile is equal to one minute of latitude: this provides a convenient scale for measuring distances on any chart. Nautical miles are abbreviated "nm".

7. A knot is the number of nautical miles flown in one hour. Almost all airspeed indicators measure speed in terms of knots, not miles per hour. One hundred knots indicates that the aircraft would fly one hundred nautical miles in one hour in a no-wind condition. Knots can be used to measure both *airspeed* and *ground speed*.

8. Latitude and Longitude. Navigation begins with is a common reference system or imaginary grid "drawn" on the earth's surface by *parallels of latitude* and *meridians of longitude*. This system is based on an assumption that the earth is spherical. In reality, it's slightly irregular, but the irregularities are small, and errors caused by the irregularities can be easily corrected. The numbers representing a position in terms of latitude and longitude are known as the coordinates of that position. Each is measured in degrees, and each degree is divided into 60 smaller increments called minutes. Each minute may be further divided into 60 seconds, or tenths and hundredths of minutes.



*Latitude* is the angular distance of a place north or south from the equator. The equator is a great circle midway between the poles. Parallel with the equator are lines of latitude. Each of these parallel lines is a small circle, and each has a definitive location. The location of the latitude is determined by figuring the angle at the center of the earth between the latitude and the equator. The equator is latitude  $0^\circ$ , and the poles are located at  $90^\circ$  latitude. Since there are two latitudes with the same number (two  $45^\circ$  latitudes, two  $30^\circ$ , etc.) the letter designators N and S are used to show which latitude is meant. The North Pole is  $90^\circ$  north of the equator and the South Pole is  $90^\circ$  south of the equator.

*Longitude* is counted east and west from the Greenwich (zero) meridian through  $180^\circ$ . Thus the Greenwich Meridian is zero degrees longitude on one side of the earth, and after crossing the poles it becomes the 180th meridian ( $180^\circ$  east or west of the  $0^\circ$  meridian). Therefore all longitudes are designated either E or W.

Using latitude and longitude, any position on a map or chart can be identified. When identifying a location by its position within this latitude/longitude (lat/long), you identify the position's coordinates *always indicating latitude first* and then longitude. For example, the coordinates N  $39^\circ 04.1'$ , W  $95^\circ 37.3'$  are read as "North thirty-nine degrees, four point one minutes; West ninety-five degrees, thirty-seven point three minutes." If you locate these coordinates on *any* appropriate aeronautical chart of North America, you will *always* find Philip Billard Municipal Airport in Topeka, Kansas.

9. Heading and distance. To determine a heading, locate the departure and destination points on the chart and lay the edge of a special protractor, or *plotter*, along a line connecting the two points. Use a marker to trace the route. Read the true course for this leg by sliding the plotter left or right until the center point, or grommet, sits on top of a line of longitude. When the course is more to the north or south, you can measure it by centering the grommet on a parallel of latitude, then reading the course from the inner scale that's closer to the grommet. [As

a "stupid check," note the heading in terms of cardinal points (e.g., N, NW, NNW), and see if this agrees with your first result.]

To determine the distance you're going to travel, lay the plotter on the route and read the distance using the scale that's printed on the plotter's straight edge: one edge measures nautical miles and the other statute miles.

10. Tracking current position. Knowing how to track the aircraft's progress on a sectional chart and a map is essential in order to maintain situational awareness. This, in turn, allows you to accurately mark targets. We previously discussed how to use navigational aids and a sectional chart to plot and navigate a course; the same principles are used during flight to keep track of the aircraft's current position and to record sightings. Besides tracking your position by looking at ground features and following along on your sectional, the pilot or observer can use the VORs, DME and the GPS to update you on current position.

There are a number of ways you can add information to your chart that will help during the flight. Tick marks along the course line at specific intervals will help you keep track of your position during flight (situational awareness). Some individuals prefer five- or ten-nautical mile (nm) intervals for tick marks, while others prefer two- or four-nm intervals. Four-nautical mile spacing works well for aircraft that operate at approximately 120 knots. Since the 120-knot airplane travels 2 nm every minute, each 4 nm tick mark represents approximately two minutes of flight time. On the left side of the course line you have more tick marks, at five-nm intervals, but measured backward from the destination. In flight, these continuously indicate distance remaining to the destination, and you can easily translate that into the time left to your destination.

The next step in preparing the chart is to identify *checkpoints* along the course; you can use these to check your position on- or off-course, and the timing along the leg. Prominent features that will be easily seen from the air make the best checkpoints, and many like to circle them or highlight them with a marker in advance. You should select easy (large) targets such as tall towers, cities and towns, major roads and railroads, and significant topological features such as lakes and rivers. Try not to select checkpoints that are too close together. During a mission, checkpoint spacing will be controlled by the search altitude and weather conditions and visibility at the time of the flight.

11. Recording and reporting position. Being able to record and report the position of a ground feature is a critical skill in all CAP ES missions. Once an aircrew locates a downed aircraft or determines the location of a breach in a levy, they must be able to pinpoint the location on the sectional and report that position to others. Since the details on the sectional chart are often not detailed enough to be useful to ground units, the scanner usually has to transfer that information to a map (e.g., road or topographical).

Using all available tools (i.e., VOR, DME, GPS, and visual references), record the position of the target (e.g., aircraft, levy, spill, or damaged plant) on the sectional. Using lat/long coordinates or the target's relation to observable ground features (e.g., roads, rivers, towns, etc.), transfer the target's position to a road or topo map. [Remember, an important part of planning a mission includes ensuring that you have the same kind of map that the ground units are using, so the position you give them will be easily understandable.]

### **Additional Information**

More detailed information on this topic is available in Chapter 8 of the *Mission Scanner Reference Text*.

### **Evaluation Preparation**

**Setup:** Provide the student with a plotter, a sectional chart and a map.

**Brief Student:** You are a Scanner trainee asked to discuss navigation terms, determine a heading and the distance between two points, and given a sectional and a map, locate an aircraft's current position and record the position of a ground feature.

## Evaluation

### Performance measures

### Results

- |   |   |   |
|---|---|---|
| 1. Discuss the use of the following navigational terms:   | P | F |
| a. Course, heading and ground track.  |   |   |
| b. Nautical mile and knot.  |   |   |
| 2. Given a plotter and a sectional, determine a route's heading and distance.   | P | F |
| 3. Given a sectional, record a ground position by its latitude/longitude and then record that position on a road or topo map. | P | F |

Student must receive a pass on all performance measures to qualify in this task. If the individual fails any measure, show what was done wrong and how to do it correctly.

**MS P-2013**  
**DISCUSS MISSION SCANNER DUTIES AND RESPONSIBILITIES**

**CONDITIONS**

You are a Mission Scanner trainee and must discuss scanner duties and responsibilities.

**OBJECTIVES**

Discuss scanner duties and responsibilities.

**TRAINING AND EVALUATION**

**Training Outline**

1. As a Mission Scanner trainee, understanding your duties and responsibilities is essential. Additionally, a basic knowledge of the Mission Observer's duties and responsibilities is helpful.
2. The scanner's primary role is performing an effective visual search, maintaining constant eye contact with the ground while flying over the search area.
3. A scanner must report to duty in accordance with the "IM SAFE" criteria of CAPR 60-1. This covers illness, medication, stress, alcohol, fatigue, and emotion.
4. Other duties and responsibilities include:
  - a. Wear appropriate clothes for a mission.
  - b. Carry and properly use equipment. Return borrowed or assigned equipment.
  - c. Carry current credentials.
  - d. Assist in avoiding obstacles during taxiing.
  - e. Obey sterile cockpit rules.
  - f. Report observations accurately and honestly, and report all sightings.
  - g. Keep accurate sketches and notes.
  - h. Properly complete all pertinent paperwork.
  - i. Report availability for additional assignments.
5. Review and discuss observer duties and responsibilities:
  - a. Report with the mission pilot for briefings.
  - b. Assist in planning the mission.
  - c. Assist in avoiding collisions and obstacles during taxiing.
  - d. Assist in setting up and operating aircraft and CAP radios.
  - e. Assist in setting up and operating aircraft navigational equipment.
  - f. Assist enforcing sterile cockpit rules.
  - g. Maintain situational awareness at all times.
  - h. Assist in monitoring fuel status.
  - i. Monitor the electronic search devices aboard the aircraft and advise the pilot when making course corrections in response to ELT signals.
  - j. Keep mission base and/or high bird apprised of status.
  - k. Coordinate scanner assignments and ensure proper breaks for the scanners; monitor the crew for fatigue and dehydration.
  - l. Maintain a chronological flight log of all observations of note, including precise locations, sketches and any other noteworthy information.
  - m. Report with the mission pilot for debriefing; assist in completing the reverse of CAPF 104.
  - n. Keep track of assigned supplies and equipment.

### Additional Information

More detailed information on this topic is available in CAPR 60-1 and in Chapter 1 of the *Mission Scanner Reference Text*.

### Evaluation Preparation

**Setup:** Provide the student with a current copy of CAPR 60-1 and the MART.

**Brief Student:** You are a Scanner trainee asked about your duties and responsibilities, and to discuss the Scanner's job.

### Evaluation

#### Performance measures

#### Results

- |   |   |   |
|---|---|---|
| 1. State the primary role of the scanner.             | P | F |
| 2. Discuss the "IM SAFE" criteria.                    | P | F |
| 3. Discuss other scanner duties and responsibilities. | P | F |
| 4. Review the observer duties and responsibilities.   | P | F |

Student must receive a pass on all performance measures to qualify in this task. If the individual fails any measure, show what was done wrong and how to do it correctly.

**MS P-2014**  
**DISCUSS CAP LIABILITY COVERAGE AND MISHAP REPORTING**

**CONDITIONS**

You are a Mission Scanner trainee and must discuss CAP liability coverage and mishap reporting.

**OBJECTIVES**

Discuss liability coverage provided to CAP personnel and mishap reporting.

**TRAINING AND EVALUATION**

**Training Outline**

1. As a mission aircrew member there is a small chance that you may be involved in an accident during a mission. A basic knowledge of liability coverage provided to you, and its applicability and limitations, is essential.
2. Using the current CAPRs 60-1 and 900-5 discuss the following, including when the coverage applies and what is covered:
  - a. Federal Employee Compensation Act (FECA).
  - b. Federal Tort Claims Act (FTCA).
  - c. CAP corporate insurance.
3. Using the current CAPR 62-2 (Mishap Reporting and Investigation), discuss what constitutes an accident and an incident, when they must be reported, what information is needed, and who it is given to.

**Additional Information**

More detailed information on this topic is available in Chapter 1 of the *Mission Scanner Reference Text*.

**Evaluation Preparation**

**Setup:** Provide the student with current copies of CAPRs 900-5, 60-1 and 62-2 (with a copy of CAPF 78).

**Brief Student:** You are an aircrew member asked to discuss FECA, FTCA and CAP corporate coverage, reporting requirements in case of an accident, and assessments that may be made for aircraft damage.

<u>Performance measures</u>	<u>Results</u>
1. Discuss FECA, including what types of missions afford this coverage and what is covered.	P F
2. Discuss FTCA, including what types of missions afford this coverage and what is covered.	P F
3. Discuss CAP corporate insurance, including what types of missions afford this coverage and what is covered.	P F
4. Discuss CAP mishap reporting, including what must be reported, how, and to whom.	P F

Student must receive a pass on all performance measures to qualify in this task. If the individual fails any measure, show what was done wrong and how to do it correctly.

**MS P-2015**  
**ENTER DATA INTO CAP FORMS**

**CONDITIONS**

You are a Mission Scanner trainee and must enter data into a form.

**OBJECTIVES**

Accurately and legibly enter data into forms and show how to correct mistakes.

**TRAINING AND EVALUATION**

**Training Outline**

1. As a Mission Scanner trainee you must know how to enter data into forms and how to correct mistakes.
2. CAP and our partner agencies rely on accurate and complete paperwork. CAP strives to maintain a professional image, and providing data that is legible is essential to this image.
3. Filling out forms and other paperwork is an essential part of any mission. Time and effort must be given to this part of the mission. Most mission forms are filled out electronically (WMIRS).
4. Some general rules to follow:
  - a. It is important not to obliterate a mistake (i.e., a person should still be able to read the mistaken entry). To correct mistakes, draw a single line through the error, enter the correct data, and initial.
  - b. Do not use of "liquid paper" when making corrections.
  - c. Do not use signature labels or stamped signatures.
  - d. Attachments (e.g., maps or sketches) should have your name, the date, aircraft 'N' number, mission and sortie numbers, and Hobbs time on them so they can be tied to the CAP form if they become separated.
  - e. Do not leave blanks; enter N/A in the blank.
  - f. Always have another crewmember review the form before submittal.

**Additional Information**

More detailed information on this topic is available in Chapter 1 of the *Mission Scanner Reference Text*.

**Evaluation Preparation**

**Setup:** Provide the student with a current copy of CAPF 104.

**Brief Student:** You are a Scanner trainee asked general rules for entering data into forms, marking attachments to forms, and correcting mistakes.

**Evaluation**

<u>Performance measures</u>	<u>Results</u>
1. Show how to correct a mistake.	P F
2. Show how to mark a map that you will upload to WMIRS or attach to a form.	P F

Student must receive a pass on all performance measures to qualify in this task. If the individual fails any measure, show what was done wrong and how to do it correctly.

**MS P-2016**  
**IDENTIFY AND DISCUSS MAJOR AIRCRAFT CONTROLS**

**CONDITIONS**

You are a Mission Scanner trainee and must identify and describe the major aircraft control features.

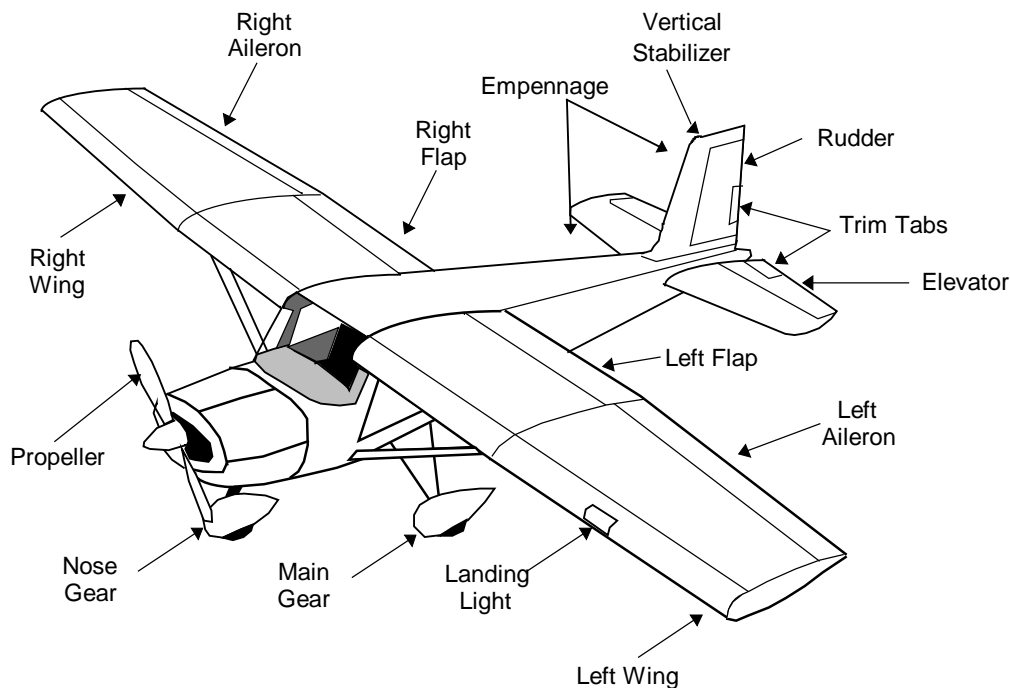
**OBJECTIVES**

Identify and discuss major aircraft controls.

**TRAINING AND EVALUATION**

**Training Outline**

1. As a Mission Scanner trainee, basic knowledge of how a typical CAP aircraft is controlled is helpful, particularly during emergencies.
2. The basic structure is the fuselage, and all other parts are attached to it. The primary source of lift is the wing, while other parts provide stability and control. The tail (empennage) consists of the horizontal stabilizer with its attached elevators and the vertical stabilizer with its attached rudder.



3. Aileron, elevator, flap and rudder movements control the aircraft in flight:
  - a. Ailerons are movable surfaces attached to the trailing edge of the wing, toward the wing tip from the flaps, that control roll (movement around the longitudinal axis). For example, if a pilot wants to turn to the right he turns the yoke to the right. This causes the right aileron to move up (creating a loss of lift on the right wing) and the left aileron to move down (creating lift on the left wing). The combined effects cause the aircraft to "roll" to the right.
  - b. The elevator is a movable surface attached to the trailing edge of the tail's horizontal stabilizer that controls pitch (movement of the nose up or down). For example, if a pilot wants to climb she pulls the yoke toward her. This causes the elevator to move up, creating a downward force on the tail and thus raising the nose.

- c. The flaps are electrically driven movable surfaces attached to the trailing edge of the wing, inboard of the ailerons. Deflection of the flaps (to a certain point) significantly increases lift. The pilot uses them during takeoff and landing.
- d. Rudders are movable surfaces attached to the trailing edge of the tail's vertical stabilizer that control yaw (side-to-side movement around the vertical axis). For example, if a pilot pushes the left rudder pedal the rudder swings to the left, creating a force that pushes the tail in the opposite direction (i.e., to the right). The nose of the aircraft then moves (yaws) to the left. [Note: the rudder pedals also move the aircraft nose wheel. When taxiing, to steer to the left the pilot would depress the left rudder pedal.]
- e. Although not a control surface, the throttle is a push rod with a black knob, located on the panel, that controls aircraft engine power. Pushing the knob in (towards the panel) increases power and pulling it out (towards you) decreases power.

### **Additional Information**

More detailed information on this topic is available in Chapter 2 of the *Mission Scanner Reference Text*.

### **Evaluation Preparation**

**Setup:** Provide the student access to an aircraft (or picture or model that shows aircraft control surfaces).

**Brief Student:** You are a Scanner trainee asked to identify and discuss the major aircraft control surfaces.

### **Evaluation**

<u>Performance measures</u>	<u>Results</u>
1. Demonstrate and discuss how the pilot turns (rolls) the aircraft left or right.	P F
2. Demonstrate and discuss how the pilot makes the aircraft climb or dive.	P F
3. Demonstrate and discuss how the pilot moves the aircraft's nose to the left or right.	P F
4. Demonstrate and discuss how the pilot steers the aircraft to the left or right while taxiing.	P F
5. Demonstrate and discuss how the pilot increases or decreases engine power.	P F

Student must receive a pass on all performance measures to qualify in this task. If the individual fails any measure, show what was done wrong and how to do it correctly.

**MS P-2017**  
**IDENTIFY AND DISCUSS MAJOR AIRCRAFT INSTRUMENTS**

**CONDITIONS**

You are a Mission Scanner trainee and must identify and discuss major aircraft instruments.

**OBJECTIVES**

Identify and discuss major aircraft instruments.

**TRAINING AND EVALUATION**

**Training Outline**

1. As a Mission Scanner trainee, basic knowledge of typical CAP aircraft instruments is helpful, particularly during an emergency.
2. Refer to Chapter 2 of the *Mission Scanner Reference Text* for pictures of the following instruments. The basic instruments are:
  - a. The *magnetic compass* shows the aircraft's heading in relationship to earth's magnetic North Pole.
  - b. The *heading indicator* is set to the magnetic compass. A gyroscope, it provides a steady reading that is easier for the pilot to read than the magnetic compass.
  - c. The *altimeter* shows altitude above mean sea level.
  - d. The *airspeed indicator* shows the speed at which the aircraft is moving through the air.
  - e. The *attitude indicator* (artificial horizon) is highly reliable and provides a very realistic picture of the attitude of the aircraft (turning, climbing or diving).
  - f. Other engine instruments provide fuel level and engine performance.
  - g. The global positioning system (*GPS*) is a satellite-based system that provides highly accurate position and velocity information (altitude, heading and speed).
  - i. The nav/comm (navigation/communications) *radios* allow the pilot or observer to communicate with air traffic control and other agencies.
  - j. The *audio panel* acts as the communications 'hub' of the aircraft. It allows the pilot or observer to select which radio is active, and directs other communication and navigation instruments to the crew headsets or the overhead speaker.
  - k. The *transponder* provides a signal to air traffic control that lets them know the aircraft's identification, position and altitude.
3. **Do not reposition any aircraft instrument's settings or controls without first asking the pilot.**

**Additional Information**

More detailed information on this topic is available in Chapter 2 of the *Mission Scanner Reference Text*.

**Evaluation Preparation**

**Setup:** Provide the student access to an aircraft (or a picture or model that shows aircraft instruments).

**Brief Student:** You are a Scanner trainee asked the basics about aircraft instruments.

## Evaluation

### Performance measures

### Results

1. Identify and describe the basic function of the following aircraft instruments:

P F

- a. Magnetic compass
- b. Heading indicator
- c. Altimeter
- d. Airspeed indicator
- e. Attitude indicator
- f. GPS
- g. Radios
- h. Audio panel
- i. Transponder

2. State the rule on repositioning any aircraft instrument's settings or controls.

P F

Student must receive a pass on all performance measures to qualify in this task. If the individual fails any measure, show what was done wrong and how to do it correctly.

**MS P-2018**  
**DISCUSS AIRCRAFT WEIGHT AND BALANCE**

**CONDITIONS**

You are a Mission Scanner trainee and must discuss aircraft weight and balance.

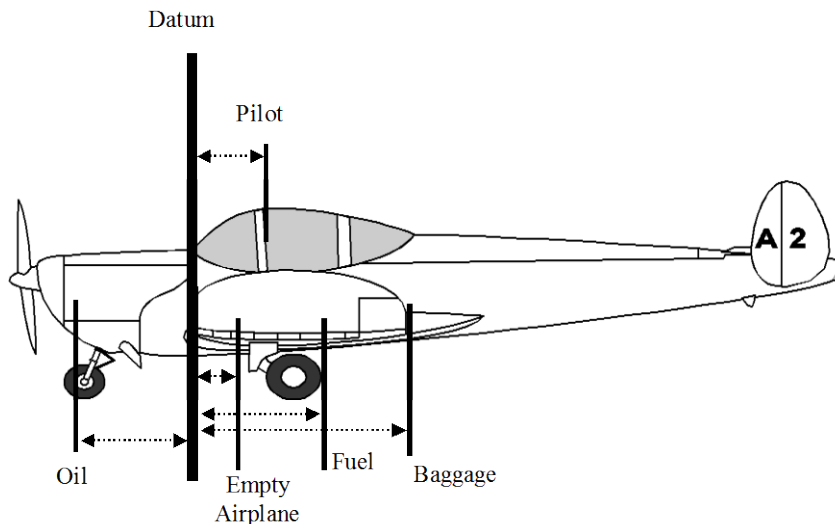
**OBJECTIVES**

Discuss aircraft weight and balance criteria and describe the potential consequences of exceeding gross weight limits, and being "tail heavy" or "nose heavy."

**TRAINING AND EVALUATION**

**Training Outline**

1. As a Mission Scanner trainee, a basic knowledge of aircraft weight and balance and the consequences of exceeding weight and balance limits are essential.
2. The amount of lift produced by the aircraft is limited, so you must not load the aircraft beyond set limits. An overloaded aircraft may not be able to take off or may exhibit unexpected and potentially lethal flight characteristics. *Be honest about your weight and the weight of your luggage when loading the aircraft.*



3. The weight of the aircraft and its instruments is called the "empty weight." For each flight the pilot computes further increases in weight for the items required for the flight. Examples are:
  - a. Fuel and oil. Fuel weighs approximately six pounds per gallon, so this is an important factor. On larger aircraft carrying a heavy load, the pilot may not fill the fuel tanks completely in order to meet weight limits. *This limits range and must be done carefully; re-check fuel status every hour.*
  - b. Pilot and crew, and everything they carry onboard.
  - c. Extra equipment that is permanently stowed in the aircraft. This includes tow bars, chocks, and survival gear.
4. Balance refers to the location of the center of gravity (c.g.) of an aircraft and is critical to stability and safety of flight.
  - a. If the aircraft is loaded "tail heavy" the c.g. moves aft and the aircraft becomes less stable. In the worst case, this can make it difficult or impossible to recover from a stall.
  - b. If the aircraft is loaded "nose heavy" the c.g. moves forward. This can lead to a condition where the pilot cannot raise the aircraft's nose in slow flight conditions such as takeoff and landing.

5. The pilot computes the aircraft c.g. as part of the "Weight & Balance" calculations done before each flight. She then checks the c.g. to ensure it is within manufacturer's limitations.

### **Additional Information**

More detailed information on this topic is available in Chapter 2 of the *Mission Scanner Reference Text*.

### **Evaluation Preparation**

**Setup:** Access to an aircraft is desirable.

**Brief Student:** You are a Scanner trainee asked the basics about aircraft weight and balance and limits.

### **Evaluation**

<u>Performance measures</u>	<u>Results</u>
1. Discuss the consequences of exceeding the aircraft's weight limit.	P F
2. Discuss the potential consequences of a "tail heavy" and a "nose heavy" aircraft.	P F
3. Discuss the importance of being accurate and honest about your and your luggage weight.	P F

Student must receive a pass on all performance measures to qualify in this task. If the individual fails any measure, show what was done wrong and how to do it correctly.

**MS P-2019**  
**IDENTIFY ITEMS CHECKED DURING AN AIRCRAFT PRE-FLIGHT INSPECTION**

**CONDITIONS**

You are a Mission Scanner trainee and must identify the items checked during an aircraft pre-flight inspection.

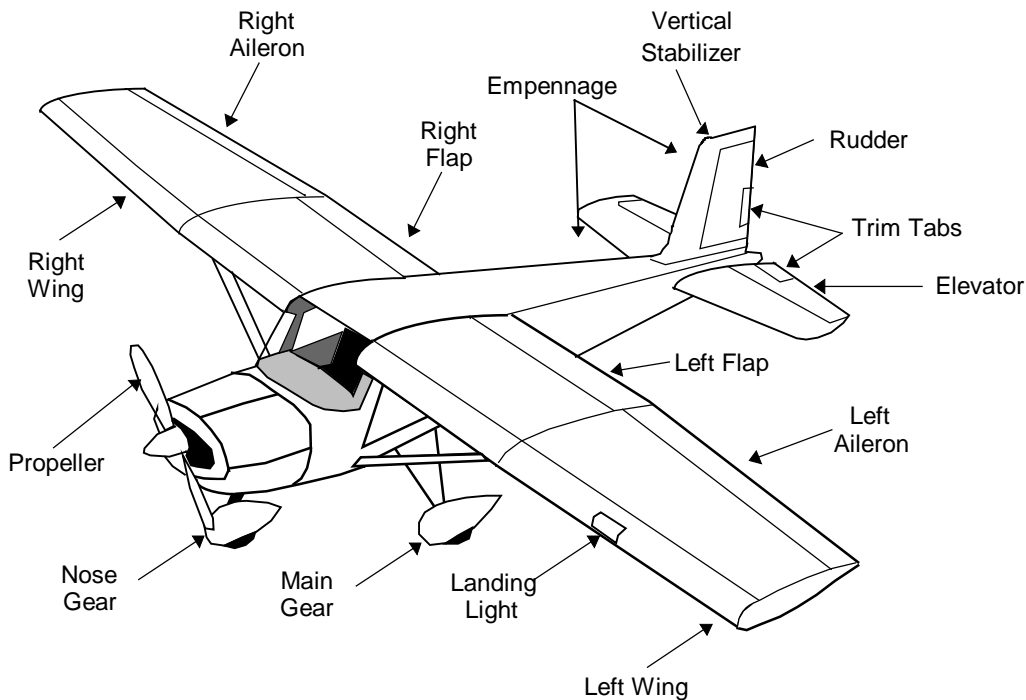
**OBJECTIVES**

Successfully identify the items checked during an aircraft pre-flight inspection.

**TRAINING AND EVALUATION**

**Training Outline**

1. As a Mission Scanner trainee, basic knowledge of the purpose of and the items checked during an aircraft pre-flight inspection is helpful.
2. A pre-flight inspection is a safety check and evaluation of the aircraft's condition for flight. This is the pilot's responsibility and should be performed with the aid of a checklist supplied by the manufacturer. If you are asked to help, you will probably read out each item on the checklist and the pilot will examine the item and acknowledge.



3. The "walk around" portion is an inspection of structural components and equipment. Other items are:
  - a. Fuel and oil. This includes "sumping" fuel and visually checking fuel levels in the tanks.
  - b. Landing, taxi, navigation and anti-collision lights.
  - c. Tires and brakes.
4. More pre-flighting takes place after the crew is buckled in, and other checklists are used for the various phases of flight (e.g., taxi, takeoff, climb, cruise, descent and landing).

### **Additional Information**

More detailed information on this topic is available in Chapter 2 of the *Mission Scanner Reference Text*.

### **Evaluation Preparation**

**Setup:** Provide the trainee access to an aircraft (or detailed model) and a typical pre-flight checklist.

**Brief Student:** You are a Scanner trainee asked the basics about pre-flight inspection.

### **Evaluation**

#### Performance measures

#### Results

- |   |   |   |
|---|---|---|
| 1. Discuss the purpose of an aircraft pre-flight inspection.                  | P | F |
| 2. Identify the major items checked during an aircraft pre-flight inspection. | P | F |

Student must receive a pass on all performance measures to qualify in this task. If the individual fails any measure, show what was done wrong and how to do it correctly.

**MS P-2020**  
**DISCUSS THE DANGERS OF WAKE TURBULENCE**

**CONDITIONS**

You are a Mission Scanner trainee and must discuss the dangers of wake turbulence.

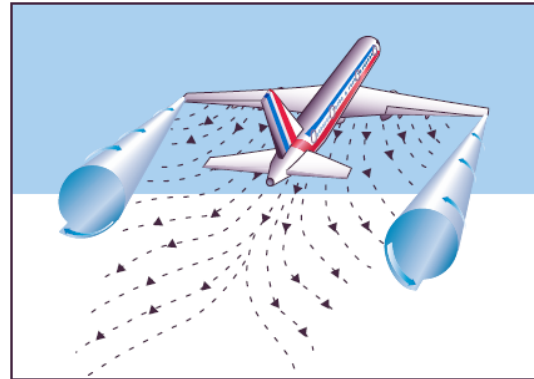
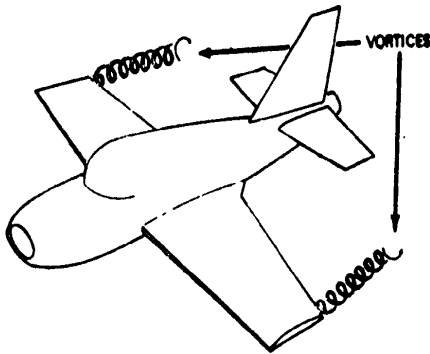
**OBJECTIVES**

Discuss wake turbulence, including where it is most likely to be encountered.

**TRAINING AND EVALUATION**

**Training Outline**

1. As a Mission Scanner trainee, knowledge of wake turbulence is helpful. *All crewmembers should assist the pilot in avoiding wake turbulence.* Wake turbulence is the disturbance of air caused by a large aircraft's movement. A spiral vortex is created around the aircraft wing tips.



2. Large jets create the most severe wake turbulence when they are taking off or landing. In a no-wind situation the vortices spread outward and away from the wing tips, and sink beneath the aircraft. Vortices may remain active well after the aircraft that spawned them has passed.
- a. When taking off behind a large jet, the pilot should wait several minutes to take off. Also, she will try to lift off the runway before the point where the large jet lifted its nose wheel.
  - b. When landing behind a large jet, the pilot should stay well above the jet's flight path and land beyond the point where the jet landed.



3. *All crewmembers should be alert to prevent the aircraft from taxiing too closely behind any large aircraft or helicopter.* The thrust produced by the engines can blow a small aircraft out of control, and can even flip it over. Rotor downwash from a helicopter can have a similar effect.

### **Additional Information**

More detailed information on this topic is available in Chapter 2 of the *Mission Scanner Reference Text*.

### **Evaluation Preparation**

**Setup:** Paper for drawings.

**Brief Student:** You are a Scanner trainee asked about wake turbulence.

### **Evaluation**

#### Performance measures

#### Results

- |  |   |   |
|--|---|---|
| 1. Discuss where wake turbulence is normally encountered.                        | P | F |
| 2. Discuss basic takeoff and landing precautions taken to avoid wake turbulence. | P | F |
| 3. Discuss the dangers of taxiing to close behind large jets or helicopters.     | P | F |

Student must receive a pass on all performance measures to qualify in this task. If the individual fails any measure, show what was done wrong and how to do it correctly.

**MS P-2021**  
**DISCUSS HOW ATMOSPHERIC AND LIGHTING CONDITIONS EFFECT SCANNING**  
**EFFECTIVENESS**

**CONDITIONS**

You are a Mission Scanner trainee and must discuss how atmospheric and lighting conditions effect scanning effectiveness.

**OBJECTIVES**

Discuss how atmospheric and lighting conditions effect scanning effectiveness.

**TRAINING AND EVALUATION**

**Training Outline**

1. As a Mission Scanner trainee, knowing how atmospheric and lighting conditions effect scanning is essential. During daylight there are many factors that can affect the scanner's ability to spot the search target. The following table shows the (approximate) distance at which the scanner can sight various objects under average visibility conditions; factors that can alter these distances are discussed below.

<b>Object</b>	<b>Distance</b>
Person in life jacket (open water or moderate seas)	1/2 mile
Person in small life raft (open water or moderate seas)	3/4 mile
Person in open meadow within wooded area	1/2 mile or less
Crash in wooded area	1/2 mile
Crash on desert or open plain	2 miles
Person on desert or open plain	1 mile or less
Vehicle in open area	2 miles or less

During darkness, scanners make fewer fixations in their search patterns than during daylight because victims in distress are likely to use lights, fires, or flares to signal rescuers. Contrast between signal light and surrounding darkness eliminates the need for scanners to concentrate on making numerous eye fixations. An attentive scanner or observer should be able to see a light, flare, or fire easily during night operations. Search aircraft interior lighting should be kept to the lowest possible level that still allows normal chart reading. This will help the eyes adjust to the darkness and reduce glare on windshield and window surfaces. Red lights are used when flying at night because that color has little or no affect on the low-light adaptation of the human eye.

Regardless of light conditions, a scanner should always maintain a systematic scanning pattern with fixations every few seconds. Darkness merely lengthens the interval between fixations.

2. Atmospheric conditions. All aircrews hope for perfect visibility during a SAR mission, but this atmospheric condition rarely exists. The atmosphere (especially the lower atmosphere) may contain significant amounts of water vapor, dust, pollen, and other particles, and these items can block vision according to their density. Of course, the farther we try to see the more particles there are and the more difficult it is to sight the objective.

3. Position of the sun. Flying “into the sun,” soon after it rises in the morning or before it sets in the afternoon, poses visibility problems. No doubt you have had this experience while driving or riding as a crewmember in an automobile. Recall how difficult it is to distinguish colors and to detect smaller objects.

4. Clouds and shadows. Shadows produced by clouds can reduce the effective scanning range. This is due to the high contrast between sunlit area and shadows. Our eyes have difficulty adjusting to such contrasts. The same effect occurs in mountainous areas where bright sunlight causes the hills and mountains to cast dark

shadows. Heavy cloud cover can "wash out" colors on the ground, making wreckage and colored clothes or signal devices harder to sight.

5. Terrain and ground cover. The more intensive search efforts occur over terrain that is either mountainous or covered with dense vegetation, or both. Mountainous area searches demand frequent variation in the scanning range. This you can visualize fairly easily; at one moment the mountain or hill places the surface within, say 200 feet of the aircraft. Upon flying past the mountain or hill the surface suddenly may be a half-mile away. Forested areas can reduce the effective scanning range dramatically. This is especially true during spring, summer, and fall when foliage is most pronounced. The situation doesn't change for the better in the winter where trees are of the evergreen types-pine, spruce, etc.-because the height of the trees plus their foliage masks the search objective very effectively. Frequently the only way for a scanner to actually spot an objective under such circumstance is to be looking down almost vertically. There are other signs to look for in such areas, but we will discuss them later.

6. Surface conditions. Here we are thinking of snow, primarily. Even a thin covering of new snow will change the contour, or shape, of a search objective. Also, the light-reflective quality of snow affects visual effectiveness. The net result is a need to bring the scanning range nearer to the aircraft.

7. Cleanliness of windows. This might seem to be a very minor factor. On the other hand, it is estimated that the scanner's visibility can be reduced up to 50 percent if the aircraft window isn't clean. If you discover this to be the case in your aircraft, clean the window yourself. However, aircraft windows are made of plastic and they are easily scratched. Ask the pilot what cleaning materials and methods are acceptable before cleaning the window. Window cleaning is a normal part of pre- and post-flight activities.

8. Use of binoculars, cameras, and sunglasses. Binoculars rapidly bring on eye fatigue when used in an aircraft, and may lead to disorientation and airsickness. They should only be used for *brief* periods to check sightings or for detailed viewing of an assessment area or target. Looking through a camera or camcorder viewfinder for extended periods can be equally as discomforting. Take breaks whenever possible. Sunglasses are an important tool for aircrew, reducing eye fatigue and glare: however, sunglasses do have some negative aspects. Looking through the aircraft windshield with polarized lenses can result in a reduced retinal image. Also, color discrimination is reduced while wearing dark lenses. And, of course, if you are looking for a lost person wearing a blue jacket, don't wear sunglasses with "blue-blocking" lenses. Finally, no matter how cool it may look, don't wear sunglasses while flying in low visibility conditions (i.e., overcast and at dawn, dusk or night).

### **Additional Information**

More detailed information on this topic is available in Chapter 5 of the *Mission Scanner Reference Text*.

### **Evaluation Preparation**

**Setup:** None.

**Brief Student:** You are a Scanner trainee asked about how atmospheric and lighting conditions effect scanning.

### **Evaluation**

<u>Performance measures</u>	<u>Results</u>
1. Discuss how atmospheric and lighting conditions effect scanning effectiveness.	P F

Student must receive a pass on all performance measures to qualify in this task. If the individual fails any measure, show what was done wrong and how to do it correctly.

**MS P-2022**  
**IDENTIFY VISUAL CLUES AND WRECKAGE PATTERNS**

**CONDITIONS**

You are a Mission Scanner trainee and must identify and discuss typical visual clues and wreckage patterns.

**OBJECTIVES**

Identify and discuss typical visual clues and wreckage patterns.

**TRAINING AND EVALUATION**

**Training Outline**

1. As a Mission Scanner trainee, knowing what to look for in the search area is essential. If you have not had much experience at "looking down" while flying, there are some surprises in store for you. Objects appear quite different when they are seen from above and at a greater distance than usual. Even if you are very familiar with the territory as seen from the surface, scanning it from the air will reveal features and objects you had no idea were there.
2. Typical visual clues. Anything that appears to be out of the ordinary should be considered a clue to the location of the search objective. In addition to this piece of advice, the following are specific clues for which scanners should be looking: [refer to the Scanner slides for pictures]

*Light colored or shiny objects* - Virtually all aircraft have white or other light colors as part of their paint schemes. Some aircraft have polished aluminum surfaces that provide contrast with the usual ground surface features and will "flash" in bright sunlight. Aircraft windshields and windows also have a reflective quality about them: if the angle of the sun is just right, you will pick up momentary flashes with either your central or peripheral vision. A flash from any angle deserves further investigation.

*Smoke and fire* - Sometimes aircraft catch fire when they crash. If conditions are right, the burning airplane may cause forest or grass fires. Survivors of a crash may build a fire to warm themselves or to signal search aircraft.

*Blackened areas* - Fire causes blackened areas. You may have to check many such areas (see false clues), but finding the search objective will make the effort worthwhile.

*Broken tree branches* - If an airplane goes down in a heavily wooded area, it will break tree branches and perhaps trees. The extent of this breakage will depend on the angle at which the trees were struck. The primary clue for the scanner, however, will be color. As you no doubt realize, the interior of a tree trunk or branch and the undersides of many types of leaves are light in color. This contrast between the light color and the darker foliage serves as a good clue.

*Local discoloration of foliage* - Here we are talking about dead or dying leaves and needles of evergreen trees. A crash that is several days old may have discolored a small area in the forest canopy. This discoloration could be the result of either a small fire or broken tree branches.

*Fresh bare earth* - An aircraft striking the ground at any angle will disturb or "plow" the earth to some degree. An overflight within a day or so of the event should provide a clue for scanners. Because of its moisture content, fresh bare earth has a different color and texture than the surrounding, undisturbed earth.

*Breaks in cultivated field patterns* - Crop farmlands always display a pattern of some type, especially during the growing season. Any disruption of such a pattern should be investigated. A crop such as corn could mask the presence of small aircraft wreckage, but the pattern made by the crashing airplane may stand out as a break in uniformity.

*Water and snow* - Water and snow are not visual clues, but they often contain such clues. For example, when an aircraft goes down in water its fuel and probably some oil will rise to the water's surface making an "oil slick" discoloration. Other material in the aircraft may also discolor the water or float as debris. If the aircraft hasn't been under the water very long, air bubbles will disturb the surface. Snow readily shows clues. Any discoloration caused by fire, fuel or debris will be very evident.

*Tracks and signals* - Any line of apparent human tracks through snow, grass, or sand should be regarded as possibly those of survivors.

*Birds and animals* - Scavenger birds (such as vultures and crows), wolves, and bears may gather at or near a crash site. Vultures (or buzzards) sense the critical condition of an injured person and gather nearby to await the person's death. If you see these birds or animals in a group, search the area thoroughly.

*False clues* - Examples are campfires and other purposely set fires, oil slicks that may have been caused by spillage from ships; and trash piles or pits. Aircraft parts may not have been removed from other crash sites, although some of the aircraft parts may have been marked with a yellow "X" (you may not be able to see the mark until near the site because the paint has faded or worn off with age).

*Survivors and Signals* - If there are survivors and if they are capable of doing so, they will attempt to signal you. The type of signal the survivors use will depend on how much they know about the process and what type signaling devices are available to them.

*Nighttime signals* - For various reasons, nighttime air searches are very infrequent. Light signals of some type will be the only clue to the search objective location. A fire or perhaps a flashlight will be the survivor's means of signaling. On the other hand, a light signal need not be very bright: one survivor used the flint spark of his cigarette lighter as a signal and he was rescued.

3. Wreckage patterns. Frequently, there are signs near a crash sight that the aircrew can use to locate the actual wreckage. The environment plays a major role in sighting the signs from the search aircraft. In crashes at sea, searchers may be unable to locate the crash site as rough seas can scatter wreckage or signs quickly. On land, the wreckage may be in dense foliage that can obscure it in a matter of days. By knowing signs to look for, the scanner can improve the effectiveness of each sortie. In general, don't expect to find anything that resembles an aircraft; most wrecks look like hastily discarded trash. However, certain patterns do result from the manner in which the accident occurred.

*The hole in the ground* is caused from steep dives into the ground or from flying straight into steep hillsides or canyon walls. Wreckage is confined to a small circular area around a deep, high-walled, narrow crater. The structure may be completely demolished with parts of the wings and empennage near the edge of the crater. Vertical dives into heavily wooded terrain will sometimes cause very little damage to the surrounding foliage, and sometimes only a day or two is needed for the foliage to repair itself.

*The corkscrew* (auger) is caused from uncontrolled spins. Wreckage is considerably broken in a small area. There are curved ground scars around a shallow crater. One wing is more heavily damaged and the fuselage is broken in several places with the tail forward in the direction of the spin. In wooded areas, damage to branches and foliage is considerable, but is confined to a small area.

*Creaming* (smear) is often caused from low-level "buzzing" or an attempted crash landing. The wreckage distribution is long and narrow with heavier components farthest away from the initial point of impact. The tail and wings remain fairly intact and sheared off close to the point of impact. Ground looping sometimes terminates the wreckage pattern with a sharp hook and may reverse the position of some wreckage components. Skipping is also quite common in open, flat terrain. In wooded areas, damage to the trees is considerable at the point of impact, but the wreckage travels among the trees beneath the foliage for a greater distance and may not be visible from the air.

The *four winds* result from mid-air collisions, explosion, or in-flight break up. Wreckage components are broken up and scattered over a wide area along the flight path. The impact areas are small but chances of sighting them are increased by the large number of them.

*Hedge trimming* is caused when an aircraft strikes a high mountain ridge or obstruction but continues on for a considerable distance before crashing. Trees or the obstruction are slightly damaged or the ground on the crest is lightly scarred. Some wreckage components may be dislodged; usually landing gear, external fuel tanks, cockpit canopy, or control surfaces. The direction of flight from the hedge trimming will aid in further search for the main scene.

A *splash* is caused when an aircraft has gone down into water: oil slicks, foam, and small bits of floating debris are apparent for a few hours after the impact. With time, the foam dissipates, the oil slicks spread and streak, and the debris become widely separated due to action of wind and currents. Sometimes emergency life rafts are ejected but, unless manned by survivors, will drift very rapidly with the wind. Oil slicks appear as smooth, slightly discolored areas on the surface and are in evidence for several hours after a splash; however, they are also caused by ships pumping their bilges and by offshore oil wells or natural oil seepage. Most aircraft sink very rapidly after ditching.

### **Additional Information**

More detailed information on this topic is available in Chapter 5 of the *Mission Scanner Reference Text*.

### **Evaluation Preparation**

**Setup:** Provide the student with pictures of typical crash clues and wreckage patterns (e.g., Scanner slides).

**Brief Student:** You are a Scanner trainee asked what to identify and discuss typical crash clues and wreckage patterns.

### **Evaluation**

#### Performance measures

#### Results

1. Identify and discuss typical visual crash clues and wreckage patterns.

P F

Student must receive a pass on all performance measures to qualify in this task. If the individual fails any measure, show what was done wrong and how to do it correctly.

## MS P-2023

# DISCUSS HOW REDUCED VISIBILITY AND TURBULENCE EFFECT SEARCH OPERATIONS

## CONDITIONS

You are a Mission Scanner trainee and must discuss how reduced visibility and turbulence effect search operations.

## OBJECTIVES

Discuss reduced visibility and turbulence, and how they effect search operations.

## TRAINING AND EVALUATION

### Training Outline

1. As a Mission Scanner trainee, understanding the causes of reduced visibility and turbulence and how this effects search operations is very useful.
2. Reduced visibility. One of the most common hazardous-weather problems is loss of visibility. Visibility may be reduced by many conditions including clouds, rain, snow, fog, haze, smoke, blowing dust, sand, and snow. A similar condition called "white out" can occur where there has been snowfall.
3. Effects. This can happen either suddenly or very insidiously, depriving the pilot of his ability to see and avoid other aircraft, and reducing or depriving him altogether of his ability to control the aircraft, unless he has had training and is proficient in instrument flying. In reduced visibility, the crew's ability to see rising terrain and to avoid towers, power transmission lines, and other man-made obstacles is diminished.

Frequently, as the sun warms the cool, hazy air and causes it to expand and rise, visibility at the surface will improve and appear acceptable. What initially appeared to be ample visibility can, after takeoff, become almost a complete obstruction to lateral or forward visibility several hundred feet above the surface. Downward visibility is satisfactory, but pilots may feel apprehensive about the loss of a visible horizon to help judge aircraft control, and about what might come out of the murk ahead. Visibility at this altitude may actually be more than the minimum three miles, yet the pilot may interpret this visual range as a wall just beyond the airplane's nose.

When haze and smoke are present, the best measure a flight crew can take to minimize risk of such an encounter is to get a thorough weather briefing before flying, and update the briefing by radio with *Flight Watch* as required.

Each member of the aircrew must be vigilant during all phases of the flight when visibility is less than perfect. Crew resource management requires that each member of the crew be assigned an area to search during the takeoff, transit and approach-to-landing phases of the flight in order to help the pilot "see and avoid" obstacles and other aircraft. The aircrew must also characterize visibility in the search area so as to establish the proper scanning range (see Chapter 5). Search visibility may be different than expected, and your search pattern may have to be adjusted accordingly. Be sure to cover this during your debriefing.

4. Turbulence. Turbulence is irregular atmospheric motion or disturbed wind flow that can be attributed to a number of causes. Turbulence can be inconsequential, mildly distracting, nauseating, or destructive depending on its intensity. Turbulence can often be avoided by changing altitudes. Aircraft manufacturers publish "maneuvering speeds" in the operating handbooks: if the aircraft stays below the maneuvering airspeed no structural damage should occur.

Just as a tree branch dangling into a stream creates continuous ripples or waves of turbulence in the water's surface, obstructions to the wind can create turbulence in the air. This type of turbulence occurs mostly close to the ground, although depending upon wind velocity and the nature of the obstruction, it may reach upward several thousand feet. In an extreme case, when winds blow against a mountainside, the mountain deflects the wind upward creating a relatively smooth updraft. Once the wind passes the summit, it tumbles down the leeward or downwind side, forming a churning, turbulent down draft of potentially violent intensity. The churning turbulence can then develop into *mountain waves* that may continue many miles from the mountain ridge. Mountain waves may be a factor when surface winds are as little as 15 knots.

5. Effects. Turbulence can become a major factor in search effectiveness. Any scanner who is uncomfortable or nauseous cannot perform her duties at a very high level of effectiveness. If you experience these sensations, inform the pilot immediately. If turbulence detracted from your concentration during the search, be sure to mention this during debriefing.

### **Additional Information**

More detailed information on this topic is available in Chapter 6 of the *Mission Scanner Reference Text*.

### **Evaluation Preparation**

**Setup:** None.

**Brief Student:** You are a Scanner trainee asked to discuss turbulence and its effects on search operations.

### **Evaluation**

<u>Performance measures</u>	<u>Results</u>
1. Discuss the causes of reduced visibility	P F
2. Discuss how reduced visibility effects search operations, and related precautions.	P F
3. Discuss the causes of turbulence.	P F
4. Discuss how turbulence effects search operations, and precautions.	P F

Student must receive a pass on all performance measures to qualify in this task. If the individual fails any measure, show what was done wrong and how to do it correctly.

**MS P-2024**  
**DISCUSS STRATEGIES TO COMBAT HIGH ALTITUDE EFFECTS**

**CONDITIONS**

You are a Mission Scanner trainee and must discuss how to recognize and combat high altitude effects.

**OBJECTIVES**

Discuss high altitude effects and demonstrate strategies to deal with them.

**TRAINING AND EVALUATION**

**Training Outline**

1. As a Mission Scanner trainee, knowing how high altitude affects you and your crew and strategies to deal with the effects is essential.
2. Dehydration. When operating in high altitudes or temperatures, body water is continuously expired from the lungs and through the skin: this physiological phenomenon is called insensible perspiration or insensible loss of water. Water loss is increased in flight because of the relatively lowered humidity at altitude, particularly on extended flights. Typical dehydration conditions are: dryness of the tissues and resulting irritation of the eyes, nose, and throat, and fatigue relating to the state of acidosis (reduced alkalinity of the blood and body tissues). A person reporting for a flight in a dehydrated state will more readily notice these symptoms until fluids are adequately replaced.

When operating in high altitudes or temperatures, crewmembers should make every effort to drink plenty of water, juice, or caffeine-free soft drinks prior to, during, and after each mission to help prevent dehydration. Experts recommend drinking 13-20 ounces (3-5 mouthfuls) of fluid thirty minutes before you leave, and 4-6 ounces (a couple of mouthfuls) every 15 minutes thereafter. Consumption of coffee, tea, cola, and cocoa should be minimized since these drinks contain caffeine. In addition, tea contains a related drug (theophylline), while cocoa (and chocolate) contain theobromine, of the same drug group. These drugs, besides having a diuretic effect, have a marked stimulating effect and can cause an increase in pulse rate, elevation of blood pressure, stimulation of digestive fluid formation, and irritability of the gastrointestinal tract.

Increasing the flow of outside air through the aircraft interior by the use of vents, or opening windows or hatches can usually remedy heat-related problems. If sufficient airflow cannot be gained, cooler air can usually be located by climbing the aircraft to a higher altitude. This may be inconsistent with search altitudes assigned by the incident commander or may be beyond the performance capability of the aircraft.

3. Ear block. As the aircraft cabin pressure decreases during ascent, the expanding air in the middle ear pushes the Eustachian tube open and, by escaping down it to the nasal passages, equalizes in pressure with the cabin pressure. But during descent, passengers must periodically open their Eustachian tube to equalize pressure. This can be accomplished by swallowing, yawning, tensing muscles in the throat or, if these do not work, by the combination of closing the mouth, pinching the nose closed and attempting to blow through the nostrils (Valsalva maneuver).
4. Sinus block. During ascent and descent, air pressure in the sinuses equalizes with the aircraft cabin pressure through small openings that connect the sinuses to the nasal passages. Either an upper respiratory infection, such as a cold or sinusitis, or a nasal allergic condition can produce enough congestion around the opening to slow equalization and, as the difference in pressure between the sinus and cabin mounts, eventually plug the opening. This "sinus block" occurs most frequently during descent. A sinus block is prevented by not flying with an upper respiratory infection or nasal allergic condition. Adequate protection is usually not provided by

decongestant sprays or drops to reduce congestion around the sinus openings. Oral decongestants have side effects that can impair pilot performance. If a sinus block does not clear shortly after landing, a physician should be consulted.

5. Hypoxia. Hypoxia is a state of oxygen deficiency in the body sufficient to impair functions of the brain and other organs. Hypoxia from exposure to altitude is due only to the reduced barometric pressures encountered at altitude, for the concentration of oxygen in the atmosphere remains about 21 percent from the ground out to space. *The body has no built-in warning system against hypoxia.* Although deterioration in night vision occurs at a cabin pressure altitude as low as 5,000 feet, other significant effects of altitude hypoxia usually do not occur in the normal healthy person below 12,000 feet. From 12,000 to 15,000 feet of altitude, judgment, memory, alertness, coordination and ability to make calculations are impaired. Headache, drowsiness, dizziness and either a sense of euphoria or belligerence may also occur. In fact, pilot performance can seriously deteriorate within 15 minutes at 15,000 feet.

Hypoxia can be prevented by: heeding factors that reduce tolerance to altitude, by enriching the inspired air with oxygen from an appropriate oxygen system and by maintaining a comfortable, safe cabin pressure altitude. For optimum protection, pilots are encouraged to use supplemental oxygen above 10,000 feet during the day, and above 5,000 feet at night. The Federal Aviation Regulations require that the minimum flight crew be provided with and use supplemental oxygen after 30 minutes of exposure to cabin pressure altitudes between 12,500 and 14,000 feet, and immediately on exposure to cabin pressure altitudes above 14,000 feet. Every occupant of the aircraft must be provided with supplement oxygen at cabin pressure altitudes above 15,000 feet.

### **Additional Information**

More detailed information on this topic is available in Chapter 7 of the *Mission Scanner Reference Text*.

### **Evaluation Preparation**

**Setup:** None.

**Brief Student:** You are a Scanner trainee asked to discuss the effects of high altitude on the body and strategies to deal with the conditions.

### **Evaluation**

<u>Performance measures</u>	<u>Results</u>
1. Discuss the symptoms and dangers of the following:	P F
a. Ear block.	
b. Sinus block.	
c. Hypoxia.	
2. Discuss strategies used to combat these symptoms.	P F

Student must receive a pass on all performance measures to qualify in this task. If the individual fails any measure, show what was done wrong and how to do it correctly.

**MS P-2025**  
**DISCUSS COMMON SEARCH TERMS**

**CONDITIONS**

You are a Mission Scanner trainee and must discuss the common search terms used during a typical mission.

**OBJECTIVES**

Discuss common search terms used during a typical mission.

**TRAINING AND EVALUATION**

**Training Outline**

1. As a Mission Scanner trainee, basic knowledge of search terms is helpful. A number of terms and planning factors should be understood in order to better understand search and rescue missions.
2. Ground and Search Track. Ground track is an imaginary line on the ground that is made by an aircraft's flight path over the ground. The search track is an imaginary swath across the surface, or ground (the scanning range and the length of the aircraft's ground track forms its dimensions).
3. Maximum Area of Possibility. This normally circular area is centered at the missing airplane's (or search objective's) last known position (LKP), corrected for the effect of wind. The circle's radius represents the maximum distance a missing aircraft might have flown based on estimated fuel endurance time and corrected for the effects of the wind over that same amount of time. The radius may also represent the maximum distance survivors might have traveled on foot, corrected for environmental or topographical conditions, such as snow, wind, mountains, and rivers.
4. Meteorological and Search Visibility. Meteorological visibility refers to the maximum range at which large objects (such as a mountain) can be seen, whereas search visibility refers to the distance at which an object the size of an automobile on the ground can be seen and recognized from an aircraft in flight. Search visibility is always less than meteorological visibility. [Note: The maximum search visibility listed on the POD chart is four nautical miles.]
5. Probability Area. This is a smaller area, within the maximum possibility area, where there is an increased likelihood of locating the objective aircraft or survivor. Distress signals, sightings, radar track data, and the flight plan are typical factors that help define the probability area's boundaries.
6. Probability of Detection. The likelihood, expressed in a percent, that a search airplane might locate the objective. Probability of detection (POD) can be affected by weather, terrain, vegetation, skill of the search crew, and numerous other factors. When planning search missions, it is obviously more economical and most beneficial to survivors if we use a search altitude and track spacing that increases POD to the maximum, consistent with the flight conditions, team member experience levels, and safety. Note: POD will be decreased if only one scanner is on board and the search pattern is not adjusted accordingly.
7. Scanning Range. Scanning range refers to the lateral distance from a scanner's search aircraft to an imaginary line on the ground parallel to the search aircraft's ground track. Within the area formed by the ground track and scanning range, the scanner is expected to have a good chance at spotting the search objective. Scanning range can be the same as or shorter than the search visibility.
8. Search Altitude. This is the altitude that the search aircraft flies above the ground (AGL). [Remember, routine flight planning and execution deals in MSL, while searches and assessments are referenced to AGL.]

9. Track Spacing. This is the distance (S) between adjacent ground tracks. The idea here is for each search track to either touch or slightly overlap the previous one.

### **Additional Information**

More detailed information on this topic is available in Chapter 9 of the *Mission Scanner Reference Text*.

### **Evaluation Preparation**

**Setup:** Provide the student with a sectional chart and a mission scenario that uses all the search terms.

**Brief Student:** You are a Scanner trainee asked to demonstrate and discuss search terms used during a typical mission.

### **Evaluation**

<u>Performance measures</u>	<u>Results</u>
1. Use and discuss search terms used during a typical mission:	P F
a. Ground and Search track.	
b. Maximum Area of Probability, Probability Area, and Probability of Detection.	
c. Meteorological and Search visibility.	
d. Scanning Range.	
e. Search Altitude and Track Spacing.	

Student must receive a pass on all performance measures to qualify in this task. If the individual fails any measure, show what was done wrong and how to do it correctly.

**IDENTIFY WHAT TO LOOK FOR AND RECORD DURING DAMAGE ASSESSMENT MISSIONS**

**CONDITIONS**

You are a Mission Scanner trainee and must identify things to look for and record during damage assessment missions.

**OBJECTIVES**

Discuss damage assessment missions, including what questions you should ask, what you should look for, and what information you should record over the site.

**TRAINING AND EVALUATION**

**Training Outline**

1. As a Mission Scanner trainee, basic knowledge of damage assessment missions is essential. Flying damage assessment sorties is not much different than flying search patterns. The big difference between a search for a downed aircraft and damage assessment is *what you look for* in the disaster area. Different types of emergencies or disasters will prompt different assessment needs, as will the nature of the operations undertaken.

The conditions that created the emergency or disaster may affect CAP operations. Extreme weather is an obvious concern, and must be considered in mission planning. The disaster may affect the physical landscape by erasing or obscuring landmarks. This may make navigation more difficult and may render existing maps obsolete.

Disasters may also destroy or render unusable some part of the area's infrastructure (e.g., roads, bridges, airfields, utilities and telecommunications). This can hamper mobility and continued operations. Also, road closures by local authorities or periodic utility outages can reduce the effectiveness and sustainability of CAP operations in the area.

2. Most often you will be given specific tasking for each sortie. However, you must always be observant and flexible. Just because you have been sent to determine the condition of a levy doesn't mean you ignore everything else you see on the way to and from the levy. Examples of questions you should be asking are (but are certainly not limited to):

- a. What is the geographical extent of the affected area?
- b. What is the severity of the damage?
- c. Is the damage spreading? If so: how far and how fast? It is particularly important to report the direction and speed of plumes (e.g., smoke or chemical).
- d. How has access to or egress from important areas been affected? For example, you may see that the southern road leading to a hospital has been blocked, but emergency vehicles can get to the hospital using an easterly approach.
- e. What are the primary active hazards in the area? Are there secondary hazards? For example, in a flood the water is the primary hazard; if the water is flowing through an industrial zone then chemical spills and fumes may be secondary hazards.
- f. Is the disaster spreading toward emergency or disaster operating bases, or indirectly threatening these areas? For example, is the only road leading to an isolated aid station about to be flooded?
- g. Have utilities been affected by the emergency or disaster? Look for effects on power transmission lines, power generating stations or substations, and water or sewage treatment facilities.
- h. Can you see alternatives to problems? Examples are alternate roads, alternate areas to construct aid stations, alternate landing zones, and locations of areas and facilities unaffected by the emergency or disaster.

3. It is very important to have local maps on which you can indicate damaged areas, as it is difficult to record the boundaries of large areas using lat/long coordinates.
4. Some specific things to look for during a damage assessment sortie are:
  - a. Breaks in pavement, railways, bridges, dams, levees, pipelines, runways, and structures.
  - b. Roads/streets blocked by water, debris or landslide (same for helipads and runways).
  - c. Downed power lines.
  - d. Ruptured water lines (this may have a major impact on firefighting capabilities).
  - e. Motorists in distress or major accidents.
  - f. Alternate routes for emergency vehicles or evacuation.
  - g. Distress signals from survivors.
5. At each site, besides sketching or highlighting the extent of the damage on local maps and identifying access/egress routes, you should record:
  - a. Lat/long and time.
  - b. Description.
  - c. Type and extent of damage.
  - d. Photo number or time reference for videotape.
  - e. Status (e.g., the fire is out, the fire is spreading to the northeast, or the floodwaters are receding).
6. An individual is very difficult to spot from the air, but CAP aircraft can do well in some situations:
  - a. Persons who are simply lost and are able to assist in their rescue. Persons who frequent the outdoors are often trained in survival and have the means to signal searching aircraft.
  - b. Persons who may be wandering along roads or highways, such as Alzheimer's patients.
  - c. Persons trapped or isolated by natural disasters such as floods. These persons often can be found on high ground, on top of structures, along a road or riverbank.
  - d. Persons who were driving. Their vehicle may be stopped along a road or highway.

Lost children and people with diminished capacities can be especially difficult to find. By the time CAP is called the police have probably already looked in the obvious places. Often, these individuals will be hiding from their searchers. Route and grid searches must be done with great care and with full, well-rested crews. Knowledge of what they are wearing and how they may respond to over-flying aircraft is especially valuable in these instances. Lost persons often fight topography and are likely to be found in the most rugged portion of the surrounding country (persons who follow natural routes are seldom lost for long periods). Children under five years old frequently travel uphill; they also may hide from searchers (except at night).

### **Additional Information**

More detailed information on this topic is available in Chapter 9 of the *Mission Scanner Reference Text*.

### **Evaluation Preparation**

**Setup:** Provide the student with typical damage assessment mission scenarios and pictures.

**Brief Student:** You are a Scanner trainee asked to discuss damage assessment missions.

## Evaluation

### Performance measures

### Results

- |   |   |   |
|---|---|---|
| 1. Discuss how a disaster can effect CAP operations.                              | P | F |
| 2. Discuss the types of questions you should ask yourself during DA sorties.      | P | F |
| 3. Identify and discuss the typical things you should look for during DA sorties. | P | F |
| 4. State the information you should record during DA sorties.                     | P | F |
| 5. Discuss the limitations of an air search for a missing person.                 | P | F |

Student must receive a pass on all performance measures to qualify in this task. If the individual fails any measure, show what was done wrong and how to do it correctly.

**MS P-2027**  
**DESCRIBE CAP SEARCH PATTERNS**

**CONDITIONS**

You are a Mission Scanner trainee and must describe CAP search patterns.

**OBJECTIVES**

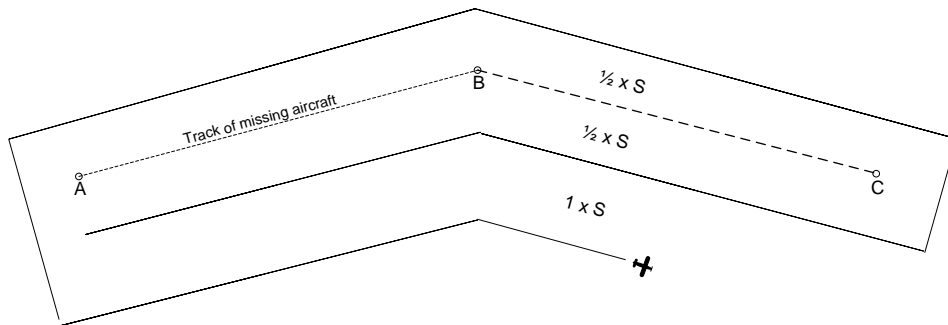
Describe the four most common CAP search patterns.

**TRAINING AND EVALUATION**

**Training Outline**

1. As a Mission Scanner trainee, understanding CAP search patterns is very helpful. This allows you to anticipate events.
2. Route search pattern. The route (track line) search pattern is normally used when an aircraft has disappeared without a trace. This search pattern is based on the assumption that the missing aircraft has crashed or made a forced landing on or near its intended track (route). It is assumed that detection may be aided by survivor signals or by electronic means. The track line pattern is also used for night searches (in suitable weather). A search aircraft using the track line pattern flies a rapid and reasonably thorough coverage on either side of the missing aircraft's intended track.

Search altitude for the track line pattern usually ranges from 1000 feet above ground level (AGL) to 2000 feet AGL for day searches, while night searches range 2000 to 3000 feet AGL (either depending upon light conditions and visibility). Lat/long coordinates for turns are determined and then entered into the GPS as waypoints, which may then be compiled into a flight plan.



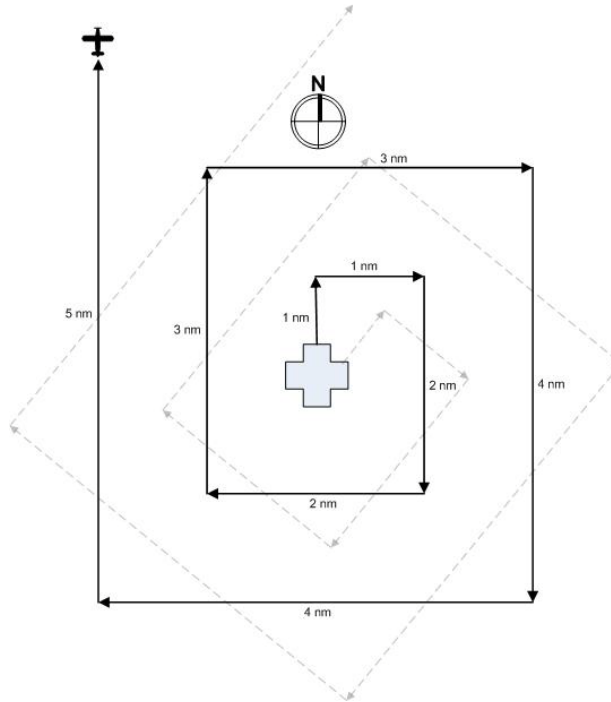
The search crew begins by flying parallel to the missing aircraft's intended course line, using the track spacing (labeled "S") determined by the incident commander or planning section chief. On the first pass, recommended spacing may be one-half that to be flown on successive passes. Flying one-half "S" track spacing in the area where the search objective is most likely to be found can increase search coverage.

3. Parallel track search pattern. The parallel track (sweep) search pattern is normally used when one or more of the following conditions exist: a) the search area is large and fairly level, b) only the approximate location of the target is known, or c) uniform coverage is desired. This type of search is used to search a grid.

The aircraft proceeds to a corner of the search area and flies at the assigned altitude, sweeping the area maintaining parallel tracks. The first track is at a distance equal to one-half ( $1/2$ ) track spacing (S) from the side of the area.



given leg from the preceding leg on the same side of the pattern is still only one "S," the value determined by the incident commander or planning section chief.



### Additional Information

More detailed information and figures on this topic are available in Chapter 10 of the *Mission Scanner Reference Text*.

### Evaluation Preparation

**Setup:** Provide the student with a sectional and descriptions of each search pattern.

**Brief Student:** You are a Scanner trainee asked to describe the most common CAP search patterns.

### Evaluation

#### Performance measures

#### Results

1. Describe the following search patterns:
  - a. Route
  - b. Parallel
  - c. Creeping line
  - d. Point-based (Expanding Square)

P F

Student must receive a pass on all performance measures to qualify in this task. If the individual fails any measure, show what was done wrong and how to do it correctly.

**MS P-2028**  
**DISCUSS FUNDAMENTALS OF CREW RESOURCE MANAGEMENT**

**CONDITIONS**

You are a Mission Scanner trainee and must discuss the fundamentals of Crew Resource Management (CRM).

**OBJECTIVES**

Discuss the fundamentals of CRM.

**TRAINING AND EVALUATION**

**Training Outline**

1. As a Mission Scanner trainee, understanding the fundamentals of Crew Resource Management (CRM) is essential.
2. Situational awareness. Simply put, situational awareness (SA) is "knowing what is going on around you at all times." SA is not restricted to just pilots -- everyone must exhibit SA at all times. Each crewmember must have their SA at peak levels while flying because it takes everyone's awareness to keep the plane safe in flight. Scanners and observers have their own unique positions and functions that require full attention, so their SA is essential to the safe operation of any CAP flight.

*Examples of good SA attitudes are:*

Good mental health, where each crewmember is clear and focused.

Good physical health. This includes fatigue, sickness, hydration, and stress factors.

Attentiveness. Keep your attention on the task at hand.

Inquisitiveness. Always asking questions, challenging ideas, and asking for input.

*Examples of SA skills:*

Professional skills developed through training, practice and experience.

Personal skills such as good communication skills. This is necessary to effectively get your point across, or receive valid input. Interpersonal skills such the basic courtesies factor greatly into how a crew will get along, and this will greatly impact crew effectiveness and performance.

To help prevent a loss of SA:

- a. Use the IMSAFE guidelines.
- b. *Use terms like "Time Out" or "Abort" or "This is Stupid."* Once terms like these are called, the pilot should terminate the task or maneuver, climb away from the ground if necessary, establish straight-and-level flight and then discuss the problem. [The term you use should be agreed upon before the flight.]

A good example comes from a CAP training mission departing a controlled airport. As the aircraft was climbing out, the Scanner spotted traffic and said "Pilot -- traffic at three o'clock." The pilot was talking to departure and replied "Quiet, I'm on the radio." The Scanner repeated his sighting, and the pilot repeated his reply. The Scanner shut up and the pilot finally saw the traffic.

What happened? The pilot ignored a serious safety input from a crewmember. His action alienated the Scanner and established a climate not conducive to safety. [Coincidentally, the Scanner was a commercial pilot and USAF T-37 instructor with more flying experience than the rest of the crew combined.]

Be aware that lack of individual respect can cause alienation, which is a serious barrier to communication (see next section) and can shatter teamwork. If an individual is insulted or ignored when making comments they will shut down and stop working with the crew. When this happens the aircrew must solicit input in order to pull the alienated crewmember back into the mission.

c. *Keep the cockpit sterile* -- keep talk to the minimum necessary for safety, particularly during taxi, takeoff, departure, low-level flying, approach, and landing. This helps remove distractions and keep everyone focused on the important things.

3. Barriers to communication. Rank, gender, experience level, age, personality, and general attitudes can all cause barriers to communication. You may occasionally be hesitant to offer an idea for fear of looking foolish or inexperienced. You may also be tempted to disregard ideas that come from individuals that have a lower experience level. If you are committed to teamwork and good crew coordination, you must look through such emotions and try to constructively and sensitively adapt to each personality involved.

You can deal best with personalities by continually showing personal and professional respect and courtesy to your teammates. Criticism will only serve to build yet another barrier to good communication. Nothing breaks down a team effort faster than hostility and resentment. Always offer opinions or ideas respectfully and constructively. Instead of telling the pilot, "You're wrong," tell him what you *think* is wrong, such as "I think that new frequency was 127.5, not 127.9."

Stress can have a very significant, negative effect on cockpit communication. An individual's preoccupation with personal, family, or job-related problems distracts him or her from paying complete attention to mission tasks and communication, depending upon the level and source of stress. The flight itself, personalities of the individuals, distractions, flight conditions, and individual performance can all be sources of communication-limiting stress. When stress reaches very high levels, it becomes an effective barrier to communication and job performance. Many fliers and medical specialists advocate refraining from flying or other complex tasks until the stress is removed.

4. Task saturation. At times, crews or individual members may be confronted with too much information to manage, or too many tasks to accomplish in the available time. This condition is referred to as *task saturation*. This will most likely happen when a crewmember is confronted with a new or different situation such as an emergency, bad weather, or motion sickness. Preoccupation with the different situation may then lead to a condition of "tunnel vision," where the individual can lose track of many other important conditions. In an advanced state, comprehension is so far gone that partial or complete *situational awareness* is lost. When individuals are task saturated to this extent, communication and information flow usually ceases.

No crewmember should ever allow the work management situation to deteriorate to such an extent as to adversely affect the pilot's ability to continue to safely operate the aircraft. Many preventable accidents have resulted from crews' entire involvement in other areas or problems, while the airplane literally flew into the ground. If any crewmember suspects pilot task saturation to be the case, nonessential discussion should cease, and the crew as a whole should discontinue low-priority aspects of the job, and even return to the mission base if necessary.

5. Assignment and coordination of duties. Assignment of aircrew duties is based on CAPR 60-3. All flight-related duties are conducted under the supervision of the aircraft commander. Mission-related duties may also be conducted under the supervision of the aircraft commander, but a properly trained observer can also fill the role of mission commander. The key is that positive delegation of monitoring duties is as important as positive delegation of flying duties.

As previously discussed, it is very important for each crewmember to know what they are supposed to be doing at all times and under all conditions. Aircraft safety duties vary with the start up, taxi, takeoff, departure, transit, approach and landing phases of flight. Mission duties are related to the mission objective, primarily to fly the aircraft safely and precisely (the pilot) and to scan effectively (scanners and observers).

Close attention should be paid during the pilot's briefing. The pilot will establish flight-specific safety "bottom lines" at this time, such as emergency duties and division of responsibilities. Each individual must again clearly understand his specific assigned duties and responsibilities before proceeding to the aircraft.

Other phases of the flight also require that distractions be kept to a minimum. Recent air transport industry statistics show that 67% of airline accidents during a particular survey period happened during only 17% of the flight time -- the taxi, takeoff, departure, approach and landing phases. The FAA has designated these phases of flight as critical, and has ruled that the cockpit environment *must* be free of extraneous activity and distractions during these phases to the maximum extent possible (the sterile cockpit).

### **Additional Information**

More detailed information and figures on this topic are available in Chapter 11 of the *Mission Scanner Reference Text*.

### **Evaluation Preparation**

**Setup:** None.

**Brief Student:** You are a Scanner trainee asked to discuss the fundamentals and strategies of CRM.

### **Evaluation**

<u>Performance measures</u>	<u>Results</u>
1. Discuss the fundamentals and strategies of Crew Resource Management:	P F
a. Situational awareness	
b. Barriers to communication	
c. Task saturation	
2. Discuss assignments and aircrew coordination.	P F

Student must receive a pass on all performance measures to qualify in this task. If the individual fails any measure, show what was done wrong and how to do it correctly.

**P-0101**  
**KEEP A LOG**

**CONDITIONS**

You have been assigned to keep a log on a mission, and must log the actions of your unit, section or team on the ICS Form 214 for use during debrief after the mission.

**OBJECTIVES**

Correctly maintain a log of actions during an incident.

**TRAINING AND EVALUATION**

**Training Outline**

1. When working an incident, staff members are required to maintain a log of all significant actions. This is important for record keeping of the accomplishments and setbacks, determining search effectiveness during debriefing, and as a legal record of CAP actions amongst many other things.
2. The mission log is started once a unit or section is opened and maintained until personnel are called in and at home safely to the incident commander. A separate log should be maintained for each varying unit or section that is assigned to the incident, and subordinate units at varying levels will normally also keep a log. This log is turned in with the debriefing paperwork and becomes part of the official mission record.
3. The following actions are always recorded in the log:

**GROUND OPERATIONS**

- a. Departure and return times to mission base
- b. Routes taken to and from the search area
- c. Times of entering and leaving search areas
- d. Any time the search line changes direction.
- e. Times/locations of clue detections or witness interviews
- f. Time/location of find
- g. Time/Location of communications checks
- h. Any event or action related to the team's ability to complete the sortie requirements (such as natural hazards encountered, or injuries to team members)
- i. Encounters or instructions from local authorities
- j. Encounters with the media
- k. Mileage/Flight time at key intersections, such as when leaving pavement or arriving at other key locations
- l. Time of distress beacon or other emergency signal acquisition
- m. Times distress beacon located and silenced. Also, if available, include the name(s) and organization(s) of person(s) involved in silencing the distress beacon, the manufacturer, serial number, dates of manufacture and battery expiration, vehicle information (type, vehicle registry, description), and the name of the owner.
- n. Personnel assignments to and from the team/unit

Note: This log (ICSF 214) may be kept as an attachment to the CAPF 109.

## AIRCREW OPERATIONS

- a. Briefing details
- b. Names of crew members
- c. Engine start time
- d. Take Off time
- e. Communications checks
- f. Time beginning assigned grid or route
- g. Time departing grid or route
- h. Significant weather, turbulence, other
- i. Time of landing
- j. Time of engine shutdown
- k. Crew changes if any

Note: This log (ICSF 214) may be kept as an attachment to the CAPF 104.

## MISSION BASE STAFF OPERATIONS

- a. Time/date unit or log started or activated
  - b. Name of unit, supervisor, and individual keeping the log
  - c. Notes from initial briefing
  - d. Time and noted from staff meetings
  - e. Significant events, actions taken, direction received or provided
4. For each log entry, the log keeper writes down the following on the ICSF 214:
- a. The time
  - b. The event taking place (see list above)
  - c. Mileage and/or location as appropriate
  - d. Name of individual annotating the log each time there is a change

### **Additional Information**

More detailed information on this topic is available in each emergency services reference text.

### **Evaluation Preparation**

**Setup:** Prepare narrative of 10 events/actions and times. Provide the individual with the list, a pen, and an ICS Form 214.

**Brief Student:** Tell the student that he is the log keeper for his unit, and that the ten events listed in the narrative have occurred. Tell him to log the events/actions on the on team log form.

Note: This evaluation can be accomplished during a training exercise by observing the events taking place and checking the log to see that they are properly annotated.

## Evaluation

### Performance measures

### Results

For each of the ten events/actions, the student:

1. Logs the time and event.

P F

2. Writes legibly and completely.

P F

Student must receive a pass on all performance measures to qualify in this task. If the individual fails any measure, show what was done wrong and how to do it correctly.